



toprankers.

**CREATIVEEDGE**

**NATIONAL INSTITUTE OF FASHION  
TECHNOLOGY (NIFT)  
PAST YEAR PAPER 05**

---

**NATIONAL INSTITUTE OF FASHION TECHNOLOGY (NIFT)**  
**PAST YEAR PAPER 05****INSTRUCTIONS TO CANDIDATES**

1. Do not open this booklet until asked to do so.
2. Do not leave the examination hall until the test is over and permitted by the invigilator.
3. Fill up the necessary information in the space provided on the cover of the Question Booklet and the Answer Sheet before commencement of the test.
4. Check for the completeness of the Question Booklet immediately after opening.
5. The duration of the test is **3** hours.
6. There are **150** questions. Each question has four answer options marked (1), (2), (3) or (4).
7. Answers are to be marked on the Answer Sheet, which is provided separately.
8. Choose the most appropriate option and darken the oval completely, corresponding to (1), (2), (3) or (4) against the relevant question number.
9. Use only **HB** pencil to darken the oval for answering.
10. Do not darken more than one oval against any question, as scanner will read such marking as wrong answer.
11. If you wish to change any answer, erase completely the one already marked and darken the fresh oval with an HB pencil.
12. All questions carry equal marks. There is Negative Marking. 0.25 mark will be deducted for every wrong answer.
13. Rough work, if any, is to be done on the Question Booklet only. No separate sheet will be provided/used for rough work.
14. Calculator, Mobile, etc., are not permitted inside the examination hall.
15. Candidate using unfair means in the test will be disqualified.
16. Appropriate civil/criminal proceedings will be instituted against the candidate taking or attempting to take this booklet or part of it outside the examination hall, besides cancellation of his/her candidature.
17. The right to exclude any question(s) from final evaluation rests with the testing authority.

**THIS QUESTION BOOKLET AND THE ANSWER SHEET ARE TO BE RETURNED ON COMPLETION OF THE TEST**

**Directions (Q.1-Q.3):** Choose the word which best expresses the meaning of the underlined word in the sentence.

- He was drawn into the vortex of politics at a very early age.
 

(a) whirlpool	(b) field
(c) arena	(d) hell
- He has the propensity for getting into debt.
 

(a) characteristic	(b) quality
(c) tendency	(d) aptitude
- The need of the hour is to initiate the renaissance of moral conscience and halt the rampant corruption, for it could even hasten the end of our civilization.
 

(a) rise	(b) introduction
(c) revival	(d) significance

**Directions (Q.4-Q.6):** Choose the word which is opposite in meaning of the underlined word in the sentence.

- She is beautiful as well as frivolous.
 

(a) indecent	(b) serious
(c) insane	(d) rude
- It is obligatory for a common citizen to follow the rules.
 

(a) optional	(b) superfluous
(c) necessary	(d) advisable
- You must quote examples to support your statement.
 

(a) reveal	(b) restrain
(c) contradict	(d) adduce

**Directions (Q.7-10):** Choose the option that is the plural form of the given word.

- Woman
 

(a) womans	(b) woman's
(c) womans'	(d) women
- Human
 

(a) humane	(b) humen
(c) humans	(d) human's
- Cone
 

(a) cones	(b) cons
(c) cone's	(d) conese
- Goose
 

(a) geeses	(b) gouse
(c) geese	(d) goose's

**Directions (Q.11-Q.14):** In each of these questions, choose the option which can be substituted for the given words.

- Stealing from the writings of others
 

(a) Copying	(b) Reframing
(c) Reproducing	(d) Plagiarism

- A person with full discretionary powers to act on behalf of a country
 

(a) Ambassador	(b) Emissary
(c) Plenipotentiary	(d) Envoy
- Design made by putting together colored pieces of glass or stones
 

(a) Oleograph	(b) Mosaic
(c) Tracery	(d) Relief
- A temporary, usually brief and often surprising change from what is normal or accepted as standard
 

(a) Abhorrence	(b) Abet
(c) Abeyance	(d) Aberration

**Directions (Q.15-Q.18):** Choose the option which best expresses the meaning of the underlined idiom / phrase in the sentence.

- I just paid him a left-handed compliment.
 

(a) an honest	(b) a well deserved
(c) an insincere	(d) a flattering
- The train was late and we had to kick our heels.
 

(a) run fast	(b) wait eagerly
(c) waste time	(d) play some game
- A movement for the world unity is in the offing.
 

(a) at the end	(b) about to start
(c) on decline	(d) in the air
- It is evident from the minister's statement that heads will roll.
 

(a) government will change
(b) transfers will take place
(c) dismissals will occur
(d) heads of department will have to repent

**Directions (Q.19-Q.21):** A word has been written in four different ways out of which only one is correctly spelt. Choose the correctly spelt word.

- A word has been written in four different ways out of which only one is correctly spelt. Choose the correctly spelt word.
 

(a) colaberation	(b) collaberation
(c) colaboration	(d) collaboration
- A word has been written in four different ways out of which only one is correctly spelt. Choose the correctly spelt word.
 

(a) exaggerate	(b) exadgerate
(c) exaggarate	(d) exaggrate
- A word has been written in four different ways out of which only one is correctly spelt. Choose the correctly spelt word.
 

(a) acquiescence	(b) aquicence
(c) acquisence	(d) acquissence

**Directions (Q.22-Q.25):** A sentence has been broken into four parts. Choose the part that has an error.

22. A sentence has been broken into four parts. Choose the part that has an error.
- When dinner was done,
  - my master went out to his labourers, and,
  - as I could discover by his voice and gesture,
  - gave his family strict charges to take care of me.
23. A sentence has been broken into four parts. Choose the part that has an error.
- Most of them, and especially those
  - who deal in the astronomical part,
  - have great faith in judicial astrology,
  - although he is ashamed to own it publicly.
24. A sentence has been broken into four parts. Choose the part that has an error.
- From comparing notes afterwards it was but a hour and a quarter,
  - yet it appeared to me that
  - the night must have almost gone,
  - and the dawn be breaking above us.
25. A sentence has been broken into four parts. Choose the part that has an error.
- The supper party given by Mr. Julius Hershey
  - to a few friends at the evening of the 30th
  - will long be remembered
  - in catering circles.

**Directions (Q.26-Q.45):** Study the passages below and answer the questions that follow each passage.

**Passage: I** The decision to award the highly prestigious Nobel Peace Prize to United States President Barack Obama has clearly taken the world by surprise even as Mr. Obama himself seems a bit overwhelmed by the extraordinary gesture. It reflects the tremendous hope that has underlined the emergence of Mr. Obama as a world figure on whom is placed the burden of enormous expectations. The Nobel committee's logic appears to be a proactive one. The peace prize is not just about recognizing achievement. It is also meant to be a catalyst for positive change. The entire world knows that Mr. Obama has triggered strong opposition from the American establishment for his bold ideas on nuclear disarmament, his advocacy of dialogue with Iran, North Korea, and even Myanmar, and his emphasis on the need for a just resolution of the Palestinian-Israeli dispute based on mutual recognition of the inalienable rights of both people to security and sovereignty. If the president has so far managed to take only baby steps in the direction of all these goals, one reason could be the extent to which

his ideas are being opposed by entrenched interests and lobbies in the U.S. The conferring of the Nobel award on a leader young in office and still relatively untested has evoked criticism. The decision has been seen in some quarters as premature, going against the tradition which has indeed boosted the Nobel Peace Prize's prestige, that the award is given in recognition of actual achievements in bringing about peace. Like every politician with a feel for global politics and power, Mr. Obama must have nurtured the ambition of achieving that recognition. He might have preferred winning the award when the fruits of his promised diplomatic exertions become a little more apparent. The gestation period for the birth of peace in West Asia is obviously longer than the nine months Mr. Obama has been in the White House. For, the promised abolition of nuclear weapons would not happen in his lifetime, the U.S. President has famously said in Prague earlier this year. But intermediate arms control can be accomplished in a matter of months and it would seem that the Norwegians could have waited at least until 2010 when his selection would have looked less arbitrary and premature. Perhaps the Nobel committee hopes the peace prize will increase Mr. Obama's domestic bargaining power while simultaneously making it harder for him to abandon the course he has set should the political pressure get unbearable. Yet this high level assertion of faith in Mr. Obama's sincerity and capability should make it easier for him to take bold strides in diplomatic initiatives in West Asia and on the disarmament front.

26. The purpose of this passage appears to be to
- criticize the Nobel committee for their decision to prematurely award the peace prize to President Obama.
  - suggest to the Norwegians that they should have waited till 2010 to award the Nobel Peace Prize to President Obama.
  - analyse the pros and cons of awarding the Nobel Peace Prize to President Obama in his baby years in office.
  - record the global reactions to the award of Nobel Peace Prize to President Obama of the US.
27. What appears to have been the logic in awarding the Nobel Peace Prize for 2009 to President Obama?
- Recognition of the track record of his achievements in terms of global peace initiatives.
  - Assertion of faith in his sincerity and capability to push forward with bold peace initiatives.
  - The global influence of the US as a Super Power.
  - None of these

28. Which of the following statements is **not** implied in the passage?
- President Obama has set out to achieve nuclear disarmament during his lifetime.
  - President Obama would have hoped to win the prestigious Nobel Peace Prize someday.
  - Awarding the Nobel Peace Prize to a leader young in office would serve as a catalyst for positive change.
  - The Nobel committee's decision to award the Peace prize to President Obama has been met with mixed reactions.
29. Which of the following is true as per the passage?
- The Nobel Committee is based in Norway.
  - White House is the official working place of the president of U.S.A.
  - Peace was achieved in West Asia within nine months.
- A only
  - B only
  - A, B & C
  - A & B

**Passage: II** The 2009 Human Development Report on migration marks a paradigm shift in attitude with its call for easing barriers to human movement within and across borders. In the process, the report shatters many myths, including the belief that it is largely international and towards Northern America. Between 2000 and 2002, 72 per cent of Indian emigrants moved to a country within Asia. In a significant contribution to our understanding of the phenomenon, it establishes that migrants enrich individual, family, and community life - at the exit as well as the entry points. This finding ought to help break the stereotyping of migrants as a people who adversely affect the surroundings. In the conventional wisdom, international migrants cause a 'brain drain' in origin countries and, except for a minuscule percentage at the higher end, take away jobs and strain precious resources. The HDR argues the opposite. Immigrants do not crowd out locals from the job market. Rather they boost economic output by encouraging investment in new businesses and initiatives. The report points to 'a massive 15 per cent' per capita increase in the patents, issued in the United States as a consequence of a mere 1.3 per cent rise in the share of migrant university graduates. While cautioning against migration becoming a substitute for development in the countries of origin, the report acknowledges its many benefits to parent communities: new ideas, jobs, social dividends in the form of higher school enrolment, and empowerment of women. In many countries, including India, remittances exceed foreign aid and Foreign Direct Investment. The HDR's single most important finding is the strong positive correlation

between migration and poverty reduction. Although the poorest people are the least mobile, and face the most barriers to movement, they gain the maximum from emigrating by way of an increase in income, higher enrolment in schools, and a reduction in child mortality. Internal migration leads to upward mobility and financial rewards, though life in the city often means crowding into slums. In a small number of cases, migration is forced by conflict, displacement, and other negative factors. But on the whole, the HDR makes an overwhelming case for enabling migration. Internationally, this is the time of hardening attitudes towards immigration and outsourcing. Internally, it is a warning to all those proponents of 'sons of soil' chauvinism who have made a career out of slandering and mistreating migrant.

30. Which of the following statements about the HDR 2009 is most accurate as per the passage ?
- It discusses human trafficking within and across national borders.
  - It pertains mainly to the Indian and Asian populace.
  - It specifies that migrating peoples' contribution towards development in parent countries is negligible.
  - It sets an example for countries across the world by advocating human movement across borders.
31. Which of the following statements is **not** implied in the passage?
- International migrants take many jobs from the local population of host countries.
  - It is time for countries across the world to harden their stance against outsourcing.
  - In India the remittances by its migrants in other countries exceed FDI and foreign aid.
  - There is no direct effect of migration on poverty.
32. Which of the following aspects are directly related to immigrants?
- Benefits to parent countries by way of new ideas, jobs and better schooling.
  - Boost in economic output through investments in new businesses and initiatives.
  - Enrichment of individual, formally and community life.
- A & B
  - B & C
  - A & C
  - A, B & C

**Passage: III** Nature is like business. Business sense dictates that we guard our capital and live from the interest. Nature's capital is the enormous diversity of living things. Without it, we cannot feed ourselves, cure ourselves of illness or provide industry with the raw

materials of wealth creation. Professor Edward Wilson, of Harvard University says, "The folly our descendants are least likely to forgive us is the ongoing loss of genetic and species diversity. This will take millions of years to correct." Only 150 plant species have ever been widely cultivated. Yet over 75,000 edible plants are known in the wild. In a hungry world, with a population growing by 90 million each year, so much wasted potential is tragic. Medicines from the wild are worth around 40 billion dollars a year. Over 5000 species are known to yield chemical with cancer fighting potential. Scientists currently estimate that the total number of species in the world is between 10-30 million with only around 1.4 million identified. The web of life is torn when mankind exploits natural resources in short-sighted ways. The trade in tropical hardwoods can destroy whole forests to extract just a few commercially attractive specimens. Bad agricultural practice triggers 24 billion tonnes of top soil erosion a year losing the equivalent of 9 million tonnes of grain output. Cutting this kind of unsuitable exploitation and instituting "sustainable utilisation" will help turn the environmental crisis around.

33. Why does the author compare 'nature' to business ?
- Because of the capital depletion in nature and business.
  - Because of the similarity with which one should use both.
  - Because of the same interest level yield.
  - Because of the diversity of the various capital inputs.
34. "The folly our descendants are least likely to forgive us." What is the business equivalent of the folly the author is referring to?
- Reducing the profit margin.
  - Not pumping some money out of profits into the business.
  - Eroding the capital lease of the business.
  - Putting interest on capital back into the business.
35. Which of the following statements is false in context of the given passage ?
- The diversity of plant life is essential for human existence.
  - Scientists know the usefulness of most plant species.
  - Chemicals for cancer treatment are available from plants.
  - There are around ten times the plant species undiscovered as compared to the discovered ones.
36. Which of the following correctly reflects the opinion of the author to take care of hunger in the world ?
- Increase the number of edible plants being cultivated.
  - Increase cultivation of the 150 species presently under cultivation.
  - Increase the cultivation of medical plants.
  - Increase the potential of the uncultivated edible plants.
37. Which of the following is mentioned as the immediate cause for the destruction of plant species ?
- Soil Erosion
  - Destruction of habitat
  - Cultivation
  - Agricultural practices

**Passage: IV** Motivations for ruralism in under developed countries are understandably different from those in developed countries. There, it is a sheer physical necessity for the very act of man's survival. In the Third World countries, which are predominantly rural, the only lever that can lift human life above its present subhuman level, is rural development. Rural life in such countries has been stagnating for centuries on end. Nothing worthwhile has been done to ameliorate the conditions of the rural population which is only slightly different from that of their quadruped counterparts. Ignorance, ill health and poverty have become synonyms of rural life in the undeveloped and underdeveloped countries. But the worst tragedy is that the concerned human populations have taken this state of affairs for granted, as something unalterable, something for which there is no remedy. Every ray of hope has gone out of their lives. In such countries, Rural Development is the inevitable condition of any material or non-material advancement. As such, enlightened sections of all such countries have been taking ever growing interest in the question of Rural Development. This was also part of the legacy of their freedom struggle. In countries like India, it is well-known that attempts at Rural Development were an inseparable part of the Independence movement. Leaders like Gandhiji realised quite well that Real India lived in her stagnating villages. Cities, which were mostly the products of Western colonialism, were just artificial showpieces. Even there, there were two worlds. The posh areas, where the affluent few, mostly, the products and custodians of imperial interest lived, were little islands engulfed by the vast ocean of dirt, represented by the vast majority of people. Cities were by no means unknown to India, but in ancient India, they were integral parts, organically related to the rest of the country and society. But, modern cities are exotic centres of commercial and industrial exploitation. Cities in ancient India were the flowers of cultural and artistic excellence of the nation,

modern cities are just parasites, preying on and debilitating the country. Hence, Gandhiji started the 'Go to Village Movement' which alone, according to him, could bring freedom to India and sustain it. Rural Development had the pride of place in his strategy for the nation's freedom.

Thus, it had its origin in the freedom struggle.

38. People are taking growing interest in Rural Development because
- nothing worthwhile can be done in the near future.
  - they have now become optimistic about it.
  - they have realised the indispensability of it.
  - they have been suffering from severe health problems.
39. Which of the following is the worst tragedy according to the author ?
- Lack of realisation of the importance of rural development.
  - Exploitation of the rural people by the city-dwellers.
  - The subhuman condition of the people.
  - The pessimism of the rural people about their own conditions.
40. Which of the following statements is **not** true in the context of the passage ?
- Most of the rich people dwelling in modern cities are genuinely concerned about rural development.
  - Rural development is a pre-requisite of any other advancement and progress.
  - The rural folk in the Third World countries feel that their subhuman condition cannot be improved.
  - Only rural development can raise the standard of living of people in the Third World countries.
41. Which of the following best describes the two divergent worlds of the modern cities?
- Commercial and industrial exploitation.
  - Patrons of western products and custodians of imperial interests.
  - A few rich people and many poor people.
  - Posh area and affluent people.

**Passage: V** A great deal of discussion continues as to the real extent of global environmental degradation and its implications. What few people challenge however, is that the renewable natural resources of developing countries are today subject to stresses of unprecedented magnitude. These pressures are brought about, in part, by increased population and the quest for an ever expanding food supply. Because the health, nutrition and general well being of the poor majority are directly dependent on the integrity and productivity of their natural resources, the

capability of governments to manage them effectively over the long term becomes of paramount importance. Developing countries are becoming more aware of the ways in which present and future economic development must build upon a sound and sustainable natural resource base. Some are looking at our long tradition in environmental protection and are receptive to the US assistance which recognises the uniqueness of the social and ecological systems in these tropical countries. Developing countries recognise the need to improve their capability to analyse issues and their own natural resource management. In February 2005, for example AID funded a National Academy of Sciences panel to advise Nepal on their severe natural resource degradation problems. Some countries such as Senegal, India, Indonesia and Thailand, are now including conservation concerns in their economic development planning process. Because so many governments of developing nations have recognised the importance of these issues, the need today is not merely one of raising additional consciousness, but for carefully designed and sharply focussed activities aimed at the establishment of effective resource management regimes that are essential to the achievement of sustained development.

42. Some of the developing countries of Asia and Africa have
- formulated very ambitious plans of protecting habitat in the region.
  - laid a great stress on the conservation of natural resources in their educational endeavour.
  - carefully dovetailed environmental conservation with the overall strategy of planned economic development.
  - sought help of the US experts in solving the problem of environmental degradation.
43. Technical know-how developed in the US
- cannot be easily assimilated by the technocrats of the developing countries.
  - can be properly utilised on the basis of developing countries being able to launch an in-depth study of their specific problems.
  - can be easily borrowed by the developing countries to solve the problem of environmental degradation.
  - can be very effective in solving the problem of resource management in tropical countries.
44. There has been a pronounced deterioration of habitat all over the globe because of
- rigorous operation of the Malthusian principle.
  - unprecedented urbanisation and dislocation of self contained rural communities.
  - optimum degree of industrialisation in the developing countries.
  - large scale deforestation and desertification.

# Experience The Creative Edge Advantage



Interactive, Live Lectures by Highly Experienced Subject Matter Experts



AI-Integrated Dashboard for Consistent Performance Tracking



24x7 Regular Doubt-Clearing Support for Academic & Non-Academic Queries



Personalised 1-1 Mentorship for Strategy, Motivation & Guidance



Latest Exam Pattern-based Full-Length Mock Tests & Assignments



Highly Detailed Post-Test Evaluation after each Mock Test attempt



Practice 100% of the Syllabus with Customizable Topic & Section Tests



Regular Expert Sessions for Exam and Career-related Guidance



Preparation for each Step of the Selection Process, including Interview, Group Discussions



Assistance with EVERYTHING - from Form Filling to College Counselling

45. The poor people of the developing world can lead a happy and contented life if
- there is a North-South dialogue and aid flows freely to the developing world.
  - industries based on agriculture are widely developed.
  - economic development takes place within the ambit of conservation of natural resources.
  - there is an assured supply of food and medical care.
46.  $\frac{(0.96)^3 - (0.1)^3}{(0.96)^2 + (0.096) + (0.1)^2}$  is simplified to
- 1.06
  - 0.995
  - 0.86
  - 0.97
47. What is the number whose eleventh part multiplied by its fifth part gives 2695 ?
- 355
  - 265
  - 375
  - 385
48. If  $2 = x + \frac{1}{1 + \frac{1}{3 + \frac{1}{4}}}$ , then the value of  $x$  is
- $\frac{18}{17}$
  - $\frac{21}{17}$
  - $\frac{13}{17}$
  - $\frac{12}{17}$
49. The sum and difference of a number with its reciprocal are  $\frac{113}{56}$  and  $\frac{15}{56}$  respectively, the number is
- $\frac{11}{4}$
  - $\frac{16}{3}$
  - $\frac{7}{4}$
  - $\frac{7}{8}$
50. The smallest positive number which is exactly divisible by  $\frac{1}{3}, \frac{1}{2}, \frac{3}{7}$  and  $\frac{4}{11}$  is
- 12
  - 9
  - 6
  - 14
51. Initially Ms Rakhi has ₹ 200 in her wallet then she increased it by 20%. Once again she increased her amount by 25%. The final value of money in her wallet will be how much percent greater than the initial amount?
- 40%
  - 45%
  - 50%
  - 55%
52. In an examination 70% of the candidates passed in History and 50% in Geography and 20% students failed in both the subjects. If 500 students passed in both the subjects, then how many candidates appeared for the exam?
- 1000
  - 1500
  - 2500
  - none of these
53. 80% of a smaller number is 4 less than 40% of a larger number. The larger number is 85 greater than the smaller one. The sum of these two numbers is
- 325
  - 425
  - 235
  - 500
54. The least number of complete years in which a sum of money put at 20% compound interest will be more than doubled is
- 8
  - 5
  - 6
  - none of these
55. A sum of money becomes  $\frac{13}{5}$  times of itself in 32 years at  $r\%$  of simple interest. What is the value of 'r'?
- 6%
  - 7%
  - 5%
  - 18%
56. The difference between interest received by A and B is ₹ 18 on ₹ 1500 for 3 years. What is the difference in rate of interest?
- 1%
  - 2.5%
  - 0.5%
  - 0.4%
57. The compound interest on a certain sum at a certain rate of interest for the second year and third year is ₹ 21780 and ₹ 23958 respectively. What is the rate of interest?
- 6%
  - 12%
  - 10%
  - 15%
58. If 25 men can do a piece of work in 36 days working 10 hours a day, then how many men are required to complete the work working 6 hours a day in 20 days?
- 75
  - 46
  - 50
  - 40
59. A can complete a work in 10 days, B in 12 days and C in 15 days. All of them began the work together, but A had to leave the work after 2 days of the start and B 3 days before the completion of the work. How long did the work last?
- 6 days
  - 8 days
  - 9 days
  - None of these
60. If 8 women collect 200 kg of tea leaves in 10 hours. How many more (in kg) of tea leaves will 12 women collect in 8 hours?
- 24 kg
  - 40 kg
  - 50 kg
  - 100 kg
61. If 45 students can consume a stock of food in 2 months, find for how many days the same stock of food will last for 27 students?
- 72 days
  - 100-days
  - 110 days
  - 120 days
62. The ratio of age of Aman and his mother is 3: 11. The difference of their ages is 24 years. What will be the ratio of their ages after 3 years?
- 1: 3
  - 2: 5
  - 4: 9
  - None of these

63. The ratio of working efficiency of  $A$  and  $B$  is 5:3 and the ratio of efficiency of  $B$  and  $C$  is 5:8. Who is the most efficient?

- (a)  $A$   
 (b)  $B$   
 (c)  $C$   
 (d) Cannot be determined

64.  $X$  can beat  $Y$  by 200 m in a race of 2000 m.  $Y$  can beat  $Z$  by 100 m in a race of 2500 m. By how many metres can  $X$  beat  $Z$  in a race of 1000 m?

- (a) 136 m (b) 145 m  
 (c) 110 m (d) 210 m

65.  $A$  and  $B$  travel the same distance at 9 km/h and 10 km/h respectively. If  $A$  takes 20 minutes longer than  $B$ , the distance travelled by each is

- (a) 16 km (b) 20 km  
 (c) 30 km (d) 15 km

66. Krishna can run a distance in 190 seconds and Shakti can run the same distance in 200 seconds. If they start together, by what distance Krishna can beat Shakti in 1 km race?

- (a) 48 m (b) 25 m  
 (c) 24 m (d) 50 m

67. An open resistor has

- (a) infinite current through it  
 (b) zero voltage across it  
 (c) infinite voltage across it  
 (d) zero current through it

68. A uniform electric field in a region between two oppositely charged plates. An electron is released from rest at the surface of negative charged plate and strikes the surface of oppositely charged plate 2 cm away, in time  $1.5 \times 10^{-8}$  s. What is the magnitude of the electric field between the plates?

- (a)  $5 \times 10^3$  V/m (b)  $4 \times 10^3$  V/m  
 (c)  $1 \times 10^3$  V/m (d)  $2 \times \frac{10^3 \text{ V}}{\text{m}}$

69. A conducting wire, whose resistance  $R$ , has a semi-circular shape of radius  $r$  as shown in the figure. If the potential difference between the ends  $a$  and  $b$  is  $V$ , what is the magnitude of the magnetic field, at the centre of the wire?



- (a)  $\mu_0 V/4Rr$  (b)  $\mu_0 V/2Rr$   
 (c)  $\mu_0 V/Rr$  (d)  $\frac{2\mu_0 V}{4Rr}$

70. Modem is short for

- (a) modulator-demodulator  
 (b) multiplexer-demultiplexer  
 (c) voltmeter-ammeter  
 (d) watt meter

71. Organic compounds are broadly divided into aromatic compounds and \_\_\_\_\_ compounds.

- (a) alkaline (b) acidic  
 (c) aliphatic (d) None of these

72. Light amplification by stimulation emission of radiation is known as

- (a) Laser (b) Radar  
 (c) Sonar (d) Toner

73. If three coins are tossed simultaneously, the probability of getting at least one head is

- (a)  $\frac{1}{8}$  (b)  $\frac{3}{8}$   
 (c)  $\frac{1}{2}$  (d)  $\frac{7}{8}$

74. First law of thermodynamics involves the concept of

- (a) absolute temperature  
 (b) entropy  
 (c) work done  
 (d) internal energy

75. The area enclosed between the curves  $y^2 = 4x$  and  $x^2 = 4y$  is

- (a)  $\frac{16}{3}$  (b) 8  
 (c)  $\frac{32}{3}$  (d) 16

**Directions (Q.76-Q.77) :** Read the following information to answer these questions.

Eight persons E, F, G, H, I, J, K and L are seated around a square table - two on each side:

There are three lady members and they are not seated next to each other.

J is between L and F.

G is between I and F.

H, a lady member, is second to the left of J.

F, a male member, is seated opposite to E, a lady member.

There is a lady member between F and I.

76. Who amongst the following are the three lady members?

- (a) E, H and J (b) E, G and J  
 (c) G, H and J (d) None of these

77. Which of the following is true about J?

- (a) J is a male member  
 (b) Gender of J cannot be determined.  
 (c) Position of J cannot be determined.  
 (d) None of these.

78. In a certain code, 'Ram is a good boy' is written as 13465 and "Hari doesn't like Sita" is written as 2078. How will you write the sentence, "Ram doesn't like Hari"?

(a) 2072 (b) 2073  
(c) 1072 (d) 1073

79. In a certain code 'water' is written as 'ZDWHU' and 'truth' is written as 'WUXWK'. How will 'earth' be written in this code?

(a) HUDWK (b) HDUKW  
(c) HDUWK (d) HUKWU

80. In a certain language, PQA is coded as 272, then LMB will be coded in that language as

(a) 123 (b) 312  
(c) 221 (d) 332

81. A watch is so placed that at 4pm the minute hand points towards North-West. In which direction does the hour hand points at 7pm ?

(a) North-East (b) South-East  
(c) North-West (d) South-West

82. Radha starts walking towards East. After walking 10 m, she turns towards South. After walking 20 m,

she turns towards West and walks 10 m. How far is she from her original position?

- (a) 10 m (b) 15 m  
(c) 20 m (d) 25 m

83. Starting from point A, Richa walked 3 m South. Then, she turned left and walked 4 m. How far is she now from the starting point and in which direction?

(a) 5 m, South-West  
(b) 5 m, North-East  
(c) 5 m, South-East  
(d) 5 m, North-West

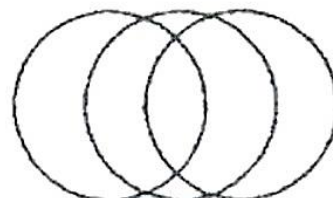
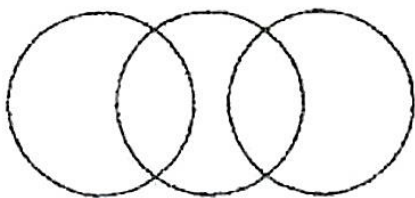
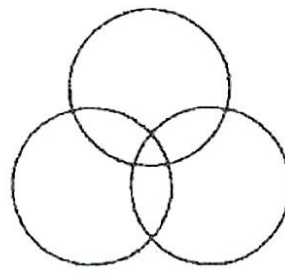
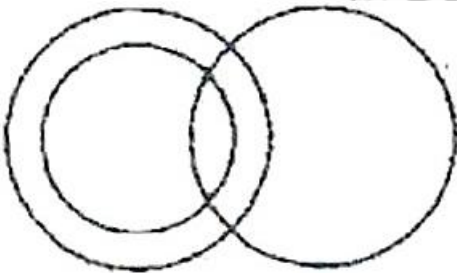
84. A, B, C, D, E, F and G are members of a family consisting of 4 adults and 3 children, two of whom, F and G are girls, A and D are brothers and A is a doctor. E is an engineer married to one of the brothers and has two children. B is married to D and G is their child. Who is C ?

- (a) G's father (b) F's father  
(c) E's daughter (d) A's son

85. Amit's mother-in-law's granddaughter is Madhuri's niece. What could be the relations between Amit and Madhuri ?

- (a) Cousin-cousin (b) Father-daughter  
(c) Brother-sister (d) None of these

86. Which of the following diagrams best depicts cousins, nephews and males?



87. Out of a total of 120 musicians in a club, 5% can play all the three instruments guitar, violin and flute. It so happens that the number of musicians who can play any two and only two of the above instruments is 30. The number of musicians who can play the guitar alone is 40. What is the total number of those who can play violin alone or flute alone?

(a) 30 (b) 38  
(c) 44 (d) 45

**Directions (Questions 88 -89) :** In each of the following questions, select one alternative out of the given four alternatives, which is analogous to the first two.

88. GAME : 71135 :: BIRD : ?

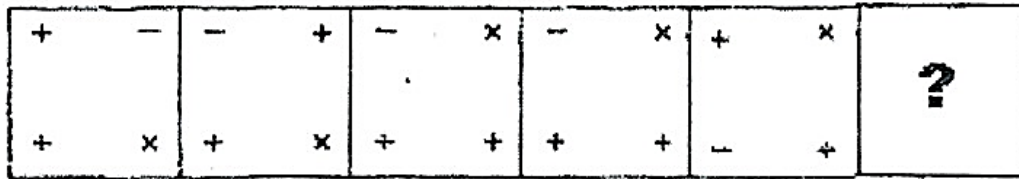
(a) 41892 (b) 29148  
(c) 29184 (d) 29814

89. TGVL : 720515 :: GPAE : ?

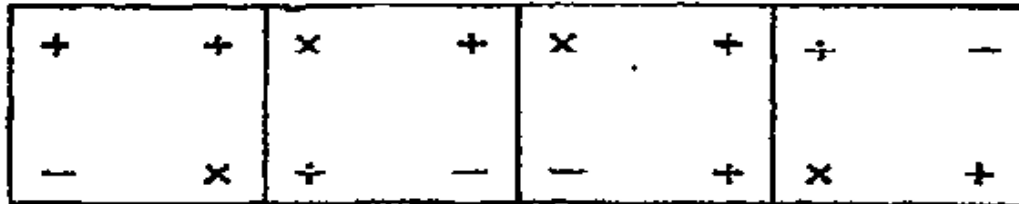
(a) 271222 (b) 415827  
(c) 41330 (d) 201126

Directions (Q.90-Q.92) : Complete the given series of figures by replacing ? from the answer figures.

90. Figures



Answer Figures



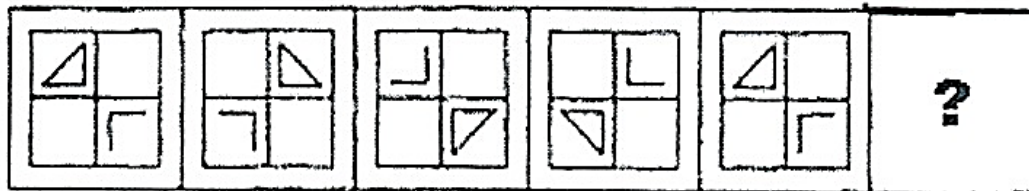
(a)

(b)

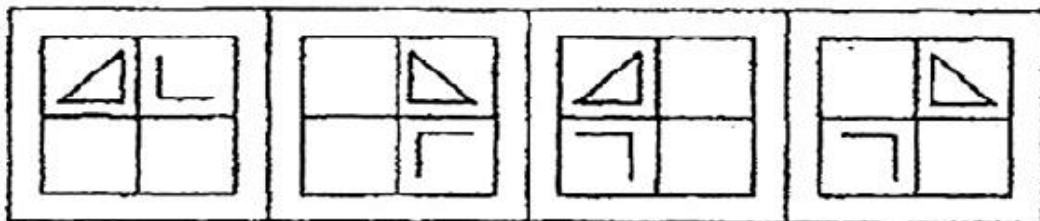
(c)

(d)

91. Figures



Answer Figures



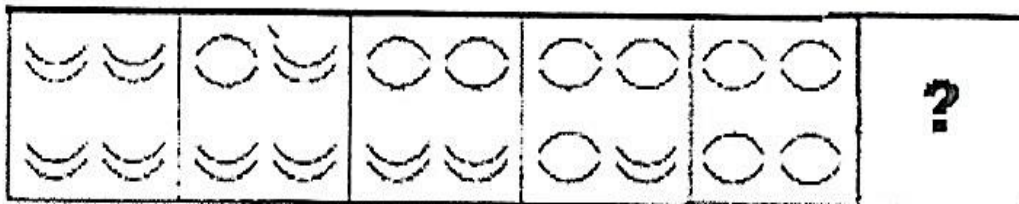
(a)

(b)

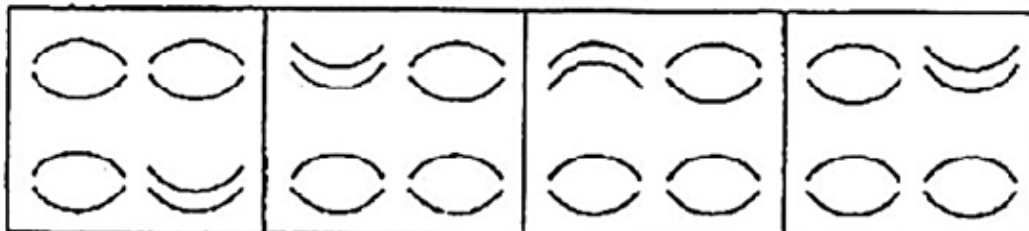
(c)

(d)

92. Figures



Answer Figures



(a)

(b)

(c)

(d)

**Directions (Q.93-Q.98) :** Each of these questions consists of a problem followed by two statements numbered as I and II. Decide whether the data in the statements are sufficient to answer the question. Mark answer as

- (a) if statement I alone is sufficient, but statement II alone is not sufficient to answer the question.
- (b) if statement II alone is sufficient, but statement I alone is not sufficient to answer the question.
- (c) if both statements taken together are sufficient to answer the question, but neither statement alone is sufficient.
- (d) if statements I and II together are not sufficient, and additional data is needed to answer the question.

**93.** A piece of string  $1\frac{1}{2}$  meters long is cut into three pieces. What is the length of each of the pieces?

- I. The length of one of the pieces is 20 cm.
- II. The sum of the lengths of two of the pieces is equal to the length of the third piece.

**94.** How many people are standing in the queue at the counter?

- I. If four more people join the queue, the number in the queue will be more than 15 .
- II. If three people give up and leave the queue, the number remaining will be less than 10 .

**95.** If the average age of three people is 21 years, is the youngest older than 13 ?

- I. The oldest is 25 .
- II. One person is 24 .

**96.** What is the value of  $3x^2 + 2x - 1$  ?

- I.  $x^2 + 2x = 0$
- II.  $x = -2$

**97.** In triangle  $ABC$ ,  $AB = x$ ,  $BC = y$ , and  $CA = y - 4$ . Which of the three angles of triangle  $ABC$  is the smallest?

- I.  $y = x + 5$
- II.  $x = 6$

**98.** In which year was Madhu born?

- I. Madhu's daughter was born in 1960 when Madhu was 28 years old.
- II. Madhu's birthday and her daughter's birthday are exactly six months apart.

**Directions (Q.99-Q.10) :** Each of these questions consists of a statement followed by two arguments numbered as I and II. Decide which of the arguments is 'strong' or 'not strong' from the statement.

Mark answer as

- (a) if only argument I is strong.
- (b) if only argument II is strong.
- (c) if neither argument I nor II is strong.

(d) if both arguments I and II are strong.

**99.** Statement :

Should there be a ban on product advertisement?

Arguments :

- I. No, it is an age of advertising. Unless your advertisement is better than that of your other competitors, the product will not be sold.
- II. Yes, the money spent on advertising is very huge and it inflates the cost of the product.

**100.** Statement :

Should the government levy tax on agricultural income also?

Arguments :

- I. Yes, that is the only way to fill the government's coffers.
- II. No, eighty percent of our population lives in rural areas.

**101.** The Maha Kumbh Mela started from January 14, 2013 is being hosted at

- (a) Haridwar. (b) Allahabad.
- (c) Ujjain. (d) Kurukshetra.

**102.** Which is the "Under Water Missile" developed by Indian defence scientists that will be integrated with nuclear submarine "INS Arihant"?

- (a) K-15 (b) Tejas
- (c) K-4 (d) Nirbhay

**103.** Oekotech is a part of the technical textiles deals in Environmental Engineering also called as

- (a) Ecotech. (b) Geotech.
- (c) Protech. (d) Agrotech.

**104.** In textile Industry, testing instrument called "Differential Scanning Calorimeter (DSC)" is used to determine

- (a) Melting Point.
- (b) Glass Transition (Temp) Tg.
- (c) Weight Loss.
- (d) All these

**105.** The peculiar art of tie & dye or knot dyeing known as "Bandhani Process" on wrap and weft separately before weaving is called

- (a) Patola. (b) Tikunthi.
- (c) Ekdoli. (d) None of these

**106.** Which French cosmetics giant has unveiled its first research and innovation centre in Mumbai on its foundation strategy of "think global, act local"?

- (a) Darphin (b) L'Oreal
- (c) Lierac (d) Ducray

**107.** Indian government has enlisted the services of Deloitte, the reputed consultancy firm to study the Rohit Nandan Committee report which was set up in 2011 on

- (a) banking sector (b) education sector
- (c) health sector (d) aviation sector

108. Sachin Tendulkar has announced his retirement from which format of international cricket?  
 (a) One Day (b) Five Day Test  
 (c) Twenty20 Match (d) None of these
109. Who is the first Emirati and Arab to win the "Tagore Peace Prize"?  
 (a) Shihab M Ghanem  
 (b) Abdul Rehman Yusuf  
 (c) Bashar Ibn Burd  
 (d) Qassim Haddad
110. \_\_\_\_\_ is a silk scarf worn as a part of the gho, the traditional male costume in Bhutan.  
 (a) Bakku (b) Kabney  
 (c) Wonju (d) Chuba
111. VIP Industries Ltd has got the exclusive rights to import and market the \_\_\_\_\_ fashguible ladies handbags in India.  
 (a) Fitch (b) Abercrombie  
 (c) Caprese (d) None of these
112. Which fashion house has launched new female garment collection 'Back to the future showcase'?  
 (a) Prafful (b) Ambica  
 (c) Satya Paul (d) Ria
113. Who is the Director Operations (Contest and Creative) of Femina Miss India 2013 ?  
 (a) Mare Robinson (b) John Abraham  
 (c) Aamir Khan (d) None of these
114. Indian Fashion Jewellery and Accessories Show to be held in July 2013 at Greater Noida is being organized by  
 (a) India Exposition Mart Ltd (IEML).  
 (b) Export Promotion Council for Handicrafts (EPCH).  
 (c) Handloom Export Promotion Council (HEPC).  
 (d) None of these
115. Which of the following is the group of major production centres of Bed Linen (Bed Sheets) in India for export to Europe and USA?  
 (a) Panipat, Karur and Kannur  
 (b) Ludhiana, Panipat and Agra  
 (c) Amroha, Jalandhar and Eluru  
 (d) Adoni, Warrangal and Jagdalpur
116. Which statement(s) is/are true about the objective of "Handloom Mark Scheme"?  
 A. Promote handloom products in domestic as well as international market.  
 B. Provide assurance to consumers about the genuineness of the product.  
 (a) Only A (b) Both A & B  
 (c) Only B (d) None of these
117. Which statement(s) is/are true about the functioning of Textiles Committee, Ministry of Textiles, Govt of India ?  
 A. To undertake, assist and encourage scientific, technological and economic research.  
 B. To establish standard specifications for textiles, textile machinery and packing materials.  
 (a) Only A (b) Only B  
 (c) Both A & B (d) None of these
118. Which Indian Company is the sponsor of the Hockey India League (HIL) 2013 ?  
 (a) Sahara (b) Hero  
 (c) Videocon (d) Honda
119. Which movie has won the best movie award in the 70<sup>th</sup> annual Golden Globe Awards organized in January 2013 ?  
 (a) Lincoln (b) Zero Dark Thirty  
 (c) Agro (d) Brave
120. 'United Colors of Benetton', the leading international brand in Clothing, Accessories and Footwear is based in  
 (a) France. (b) Italy.  
 (c) Germany. (d) UK.
121. 'Sand Mandala' is a/an \_\_\_\_\_ version of the desi Rangoli having tri-dimensional graphical and geometrical designs.  
 (a) Odissi (b) Assamese  
 (c) Tibetan (d) Rajasthani
122. Textile yarn Eri, Tasar and Muga are the various varieties of  
 (a) silk. (b) cotton.  
 (c) jute. (d) wool.
123. Which of the following trophies is not associated with the game of cricket?  
 (a) Thomas Cup  
 (b) Rohinton Baria Trophy  
 (c) Duleep Trophy  
 (d) Charminar Challenge Cup
124. Jesse Owens Global Award is given in the field of  
 (a) literature. (b) journalism.  
 (c) science. (d) sports.
125. The Keibul Lamjao, the only floating National Park in the world is located in  
 (a) Manipur. (b) Mizoram.  
 (c) Meghalaya. (d) Assam.
- Directions (Q.126-Q.128) :** Each of these questions consists of a two statements followed by two conclusion numbered as I and II respectively. Decide which of the conclusions follows from the statements.  
 Mark answer as  
 (a) if only conclusions I follows  
 (b) if only conclusion II follows  
 (c) if neither conclusion I nor II follows  
 (d) if both conclusions I and II follow

# Creative Edge's Social Channels



**INSTAGRAM**

The Creative Edge by TopRankers, **Instagram Channel** is making a splash with its captivating reels, educational posts, memes, and informative content tailored for those preparing for Design and Architecture entrance exams.



**TELEGRAM**

The Creative Edge by Toprankers **Telegram Channel** has garnered an impressive membership. It has evolved into a central hub for students in search of academic content related to Design and Architecture.



**YOUTUBE**

The Creative Edge by Toprankers channel, on **YouTube Platform**, stands out as the most subscribed channel in India for Design and Architecture entrance exam preparation. Boasting many thousands of subscribers, the channel consistently uploads new videos to provide valuable content to its audience.



**learnTogetherR**

The Creative Edge **LearnTogetherR Community** offers remarkable insights into career fields such as Architecture and Design, serving as a valuable resource for aspiring students in various forms of content.



126. Statements :

- I. All buses are cars.
- II. Some cars are roads.

Conclusions :

- I. Some cars are buses.
- II. Some buses are roads.

127. Statements :

- I. Some pastries are toffees.
- II. All toffees are chocolates.

Conclusions :

- I. Some chocolates are toffees.
- II. Some toffees are not pastries.

128. Statements :

- I. All umbrellas are aeroplanes.
- II. Some aeroplanes are birds.

Conclusions :

- I. Some umbrellas are birds.
- II. All birds are umbrellas.

**Directions (Q.129-Q.131) :** Each of these questions consists of a statement followed by two assumptions numbered as I and II. Decide which of the assumptions is implicit from the statement. Mark

- (a) if only assumption I is implicit
- (b) if only assumption II is implicit
- (c) if neither assumption I nor II is implicit
- (d) if both assumptions I and II are implicit

129. Statement : The leader of the main opposition party asserted that the call for chakka jam turned out to be a great success in the entire State.

Assumptions :

- I. The people in future will support the main opposition party.
- II. People probably are convinced about the reason behind the chakka strike call.

130. Statement :

The bridge was built at the cost of ₹ 128 crores and even civil bus service is not utilizing it, what a pity to see it grossly under utilised' - A citizen's view on a new flyover linking East and West sides of a suburb.

Assumptions :

- I. The building of such bridges does not serve any public objective.
- II. There has to be some accountability and utility of money spent on public projects.

131. Statement : A sentence in the letter to the candidates called for written exams - 'You have to bear your expenses on travel etc.'

Assumptions :

- I. If not clarified, all the candidates may claim reimbursement of expenses.
- II. Many organisations reimburse expenses on travel to candidates called to written examination.

**Directions (Q.132-Q.133):** Each of these questions consists of a statement followed by three assumptions numbered as I, II and III. Decide which of the assumptions is implicit from the statement and then decide which of the answers is correct.

132. Statement:

"Z-TV, the only TV which gives the viewers chance to watch two programmes simultaneously" - an advertisement.

Assumptions :

- I. Sale of Z-TV may increase because of the advertisement.
  - II. Some people may be influenced by the advertisement and buy Z-TV.
  - III. The sale of Z-TV may be on the downward trend.
- (a) None is implicit
  - (b) II and III are implicit
  - (c) I and II are implicit
  - (d) All are implicit

133. Statement :

The company has recently announced series of incentives to the employees who are punctual and sincere.

Assumptions :

- I. Those who are not punctual at present may get motivated by the announcement.
  - II. The productivity of the company may increase.
  - III. The profit earned by the company may be more than the amount to be spent for the incentive programmes.
- (a) None is implicit
  - (b) II and III are implicit
  - (c) All are implicit
  - (d) I and II are implicit

**Directions (Q.134-Q.143) :** Each of these questions has a statement based on the preceding passage. Evaluate each statement and mark answer as

- (a) if the statement is a Major Objective in making the decision: one of the goals sought by the decision maker.
- (b) if the statement is a Major Factor in making the decision: an aspect of the problem, specifically mentioned in the passage, which fundamentally affects and/or determines the decision.
- (c) if the statement is a Minor Factor in making the decision: a less important element bearing on or affecting a Major Factor, rather than a Major Objective directly.
- (d) if the statement is a Major Assumption in making the decision: a projection or supposition arrived at by the decision maker before considering the factor and alternative.

**Passage: I** The acquisition is being funded through low-cost debt and the impact on GCPL's consolidated debt equity ratio is 0.03. Established in 1990 in the UK, Keyline Brands was acquired by GCPL in October 2005. The brand operates in the toiletries, personal care sector and its portfolio includes a number of important niche brands including Cuticura, Aapri, Erasmic and Nulon. Soft and Gentle is the UK's fourth-largest female deodorant brand (by market share) and it reported net sales of ₹ 187 crore in 2011. "The acquisition of Soft & Gentle by Keyline Brands will add profitable scale to our UK business," said Adi Godrej, chairman, GCPL. "Over the last few years, Keyline Brands has delivered good performance and grown in double digits in a very tough market environment that is witnessing little to no growth. We expect this acquisition to be accretive in year one," he added. "As the number four women deodorant brand in the UK (by market share), Soft & Gentle enjoys strong latent brand equity," said Anand Rangaswamy, managing director of Keyline Brands. "We believe we can use the strong latent brand equity combined with updating the fragrance technology, developing further range extensions within the female personal care category and creating an integrated above the line support campaign to engage consumers and drive strong growth for the brand."

134. The acquisition of Soft and Gentle by Keyline Brands add profitable scale to GCPL's UK business.
135. Soft and Gentle is the UK's fourth largest female deodorant brand.
136. Keyline Brands delivered good performance over the last few years.
137. The integrated line support campaign will drive strong growth for the brand.
138. Soft and Gentle enjoys strong latent brand equity in UK.

**Passage: II** Indian Hotels Company Ltd. (IHCL) operates four brands - Taj, Vivanta, Gateway and Ginger in different categories. As the story goes, the first Taj Hotel was constructed in Mumbai in 1903 after Jamshedji Nusserwanji Tata, the group's founding entrepreneur, faced racial discrimination at a hotel that did not allow Indians to enter it. Pride has always been an integral part of the Tata Group and in a case of history repeating itself, the US hospitality major Orient Express refused Tata Group's proposal for a partnership in 2007 in a tale that has similar shades. The incident, it is believed, wounded Ratan Tata's pride. Four years later, the Tatas acquired a 10% stake in Orient Express for \$211 million in September and raised it to 11.5% two months later. The group, instead of getting a partnership it wanted, received

a letter from Paul Whit, the then CEO of Orient Express, which said: "Any association of our luxury brands and properties with your brands and properties would result in a reduction of our brands and of our business and would likely lead to erosion." And in October last year, just two months before Ratan Tata was set to retire, IHCL approached Orient Hotels to acquire 93% stake for \$1.8 billion - this time in an open takeover bid.

139. Jamshedji Nusserwanji Tata faced racial discrimination at a hotel that did not allow Indian to enter it.
140. Tata's association with Orient Express would have lead to erosion of Orient Express.
141. Orient Express refusal for a partnership with Tata Group wounded Ratan Tata's pride.
142. Not allowing the Tata Group's pride to be dented.
143. Tata Group had 11.5% stake in Orient Express.

**Directions (Q.144-Q.146): Read the following situation to answer these questions.**

**Situation**

Eveready Industries India is in the process of reinventing its business with a range of new-age products like portable chargers for mobile devices, aptly unveiled by the third generation in the Brij Mohan Khaitan family. Through this range of products, the current head of Eveready hopes to revitalize the Eveready brand. "For the last 8-9 years, its identity in the market is a trusted and old brand. We want to change the old bit," he explained. The new products, to be test marketed till April, are particularly targeted at the youth, but on a larger canvas, enables any one to stay connected 24 hours. The product range comprises four different products: two high capacity quick chargers for smart phones and tablets apart from one charger for the feature phones and a universal USB charger. He joined Eveready in August 2011, as executive director, soon after graduating from the London Business School. "I realized every product need not be innovative. For emerging markets, we can just see what's around us, and launch it in India," he said. Branded Eveready Ultima Mobile Power, the portable chargers are outsourced from China. Eveready's investment is in creating a completely different distribution network, separate from the traditional carbon zinc and alkaline batteries. Eveready has one of the most extensive distribution networks in India with more than 4,000 distributors reaching out to more than eight lakh retail outlets. Eveready happens to be one of the largest marketers of dry cell batteries selling about 1.2 billion units annually. The brand has 50% market share in carbon zinc batteries. The new range of products will be

distributed through apparel outlets, up-market retail stores and e-commerce sites. Priced between ₹ 1,200 and ₹ 3,200, the portable chargers are expected to give Eveready the sales growth that it is looking for. "One charger is equivalent to selling 100 batteries," the business head worked out the numbers. Stagnating sales in the traditional business was taking a toll on Eveready's performance. Moreover, input cost induced price hike had hit volumes. In 2011-12, Eveready posted a net loss of ₹ 79.85 crore on revenues of about ₹ 980 crore. For the year-end, the company is eyeing a head.

144. What is the primary objective behind Eveready launching a new product range?
- It wanted to take advantage of its appeal amongst the youth.
  - It wanted to be considered "new" instead of "old".
  - They had an existing contract with Chinese suppliers.
  - There is no longer a market for its existing product range.
145. What is Eveready counting on to drive sales growth for the new product range?
- Greater profit due to low procurement cost of the products.
  - Extensive distribution network.
  - Low volumes at higher prices.
  - Well-developed brand identity.
146. Eveready was making a loss in its traditional business due to
- high input costs.
  - decreasing demand.
  - greater competition in the market.
  - prevalence of substitutes in the market.

**Directions (Q.147-Q.150) :** Below is given a business situation followed by four inferences which can be drawn from the facts stated in the situation. Examine each

inference separately in the context of the situation and decide upon its degree of truth or falsity.

Mark answer as

- if the inference is 'definitely true', i.e., it properly follows from the statements of facts given.
- if the inference is 'probably true' though not 'definitely true' in the light of the facts given.
- if the 'data is inadequate', i.e., from the facts given you cannot say whether the inference is likely to be true or false.
- if the inference is 'definitely false', i.e., it cannot possibly be drawn from the facts given or it contradicts the given facts.

**Situation:** The jeweller-next-door may have reasons to worry, thanks to the organised retail and branded goods hitting the right chord from Indian consumers. The recent changes in lifestyle goods industry and the diamond industry, threaten to impact the family jeweller segment, which currently controls 97% of India's fragmented jeweller retail market. A study suggests that as India's jewellery market matures, it is expected to get more organised and the share of family jeweller is expected to come down. The family jeweller segment is the largest segment of the market and therefore most likely to be impacted by these changes. Family jewellers will have to bring in new practices and range of designs and customisation of jewellery would differentiate the players. Currently, organised retailers are enlarging the pie but the traditional players are not feeling the impact yet.

147. Family jewellers have never customised their designs in the past.
148. Big retail companies have the capability to bring more competition in the jewellery market.
149. There is a perceptible change in the choices of the customers in recent times with regard to lifestyle products.
150. Share of business of the small-time jewellers will reduce substantially in the near future.

toprankers.  
CREATIVEDGE™

## B1 Elite Online Batch for NID, NIFT & UCEED 2026

- 1.5 Hours of Regular Live Classes & their Recordings
- Physical & Digital Self-Study Material Physical
- Monthly Drawing Assignments
- Monthly Aptitude Topic Tests
- Regular 1-1 Mentorship sessions

[CLICK TO JOIN NOW](#)

Get **FREE** advanced college-level counseling after your exams!

Note:





toprankers.

**CREATIVEDGE**

**अद्भुत**

**CREATIVEDGE**

**साल दरसाल**

**BEMISAAL**



**RYAN GUPTA**  
ID AHMEDABAD

**/ NID 2023**



**DITHYA.S**  
ID AHMEDABAD

**/ NID 2022**



**ANISHK KACHCHAWA**  
ID VIJAYWADA

**/ NID 2021**



**EEPIKA RANI**  
IFT DELHI

**/ NIFT 2023**



**ISHA JAIN**  
IFT MUMBAI

**/ NIFT 2022**



**ITANSHI AGRAWAL**  
IFT DELHI

**/ NIFT 2021**



**IPIN**  
IT BOMBAY

**/ UCEED 2023**



**USHAGRA SINGH**  
IT ROORKEE

**/ CEED 2022**



**EHUL CHAUDHARY**  
IT BOMBAY

**/ UCEED 2021**



**ARSH MITTAL**  
EPT UNIVERSITY

**/ NATA 2023**



**AURI GOYAL**  
IRMA

**/ NATA 2022**



**ASH TIWARI**  
IRMA

**/ NATA 2021**



**KOMAL PAUL**  
SPA DELHI

**/ JEE B.ARCH 2023**



**TAHER BELGAUMWALA**  
SPA DELHI

**/ JEE B.ARCH 2022**



**KALYANI VASAWEE**  
SPA BHOPAL

**/ JEE B.ARCH 2021**

& Many More

**You can be the next.....**