



toprankers.

CREATIVEDGE

NATIONAL INSTITUTE OF DESIGN PAST YEAR PAPER 2020

NATIONAL INSTITUTE OF DESIGN
PAST YEAR PAPER 2020

Part - I

Question Number 1 to 12 consists of 01 Mark each

- The purpose of Kyoto Protocol is
 - To promote tourism
 - To contribute sustainable development
 - To promote renewable sources of energy
 - To put a limit on greenhouse gas emissions by states
- Which of the following is not an embroidery tradition of India?
 - Phulkari
 - Batik
 - Kashida
 - Chamba Rumal
- Identify the form of the painting and the state it is from:



- Pattachitra from Bengal
 - Kalighat painting from Bengal
 - Pattachitra from Odisha
 - Mata-ni-Pachhedi from Gujarat
- Guru Nanak's 550th birthday or Jayanthi celebrations in 2019 led to the building and development of which corridor that connects the Gurdwara Darbar Sahib in Pakistan to the Gurdwara Dera Baba Nanak in India?
 - Sultanpur
 - Gurdaspur
 - Gobindpur
 - Kartarpur
 - Match the brands to the country of their origin and identify the correct set.

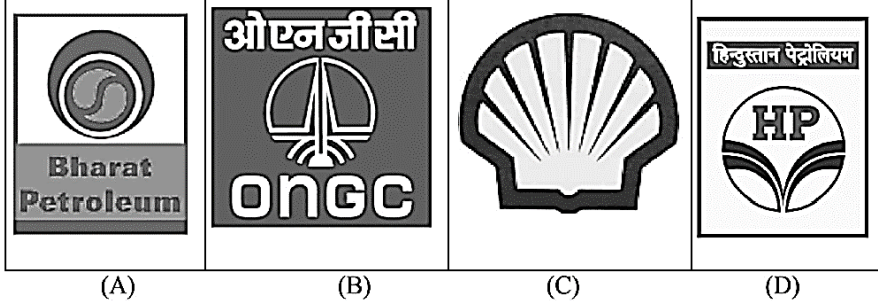
1 <i>Godrej</i>	2 SAMSUNG	3 Panasonic	4 Haier	5 SIEMENS
--------------------	---------------------	-----------------------	-------------------	---------------------

A	B	C	D
1) India	1) India	1) India	1) India
2) Japan	2) Korea	2) China	2) Korea
3) Korea	3) Japan	3) Korea	3) China
4) Germany	4) China	4) Germany	4) Germany
5) China	5) Germany	5) Japan	5) Japan

- Esther Duflo was awarded the Nobel Prize (2019) in economic sciences with her research partner
 - Abhijit Banerjee
 - Avijit Pathak
 - Avinash Banerjee
 - Abhijit Sen

7. The artist, Ramakant Gundecha who passed away in November this year was an exponent of which genre of Hindustani classical music and for which he is most renowned?
 (a) Khayal (b) Tarana (c) Thumri (d) Dhrupad

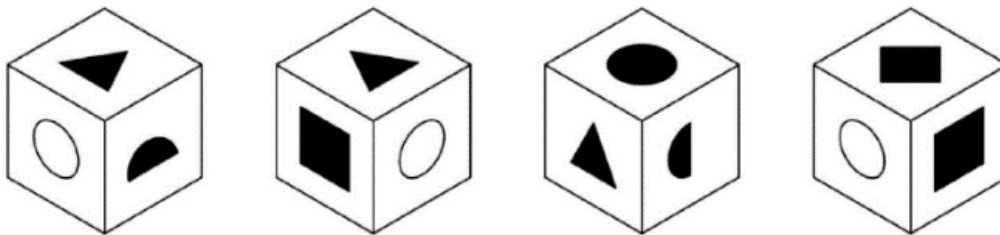
8. Which of the following is not a logo you will find at a petrol pump in India.



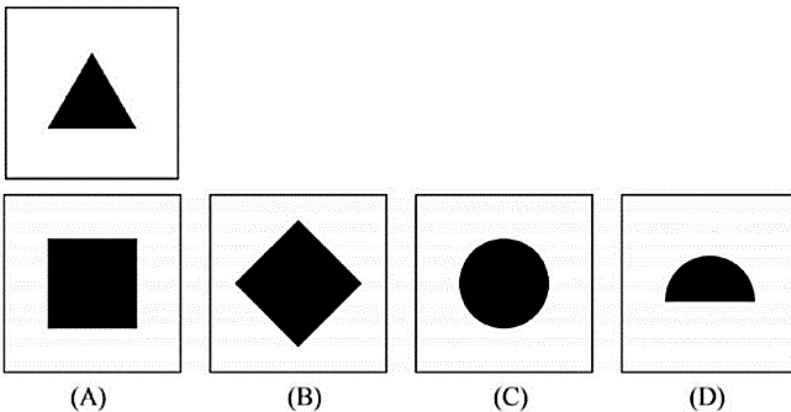
9. The ruins of the glorious Vijayanagara empire and a site of historical importance for its architectural style is today found at DD,
 (a) Tanjore (b) Belur (c) Hampi (d) Mandu
10. Jaipur foot is
 (a) A Footwear brand (b) A Prosthetic leg (c) A Tourist Place (d) A Restaurant
11. Six people, P, Q, R, S, T and U are standing in a circle. Q is standing between U and R. P is standing between T and S. U is standing to the left of S. Who is standing between P and U?
 (a) Q (b) R (c) S (d) T
12. If X is the father of Y & Y is the mother of Z and Z is the daughter of M, then how is X related to M?
 (a) Son-in-law (b) Father-in-law (c) Sister-in-law (d) Brother-in-law

Question Number 13 to 21 consists of 02 Marks each

13. Depicted below are four various orientations of the SAME cube:



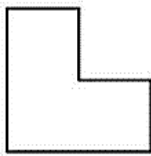
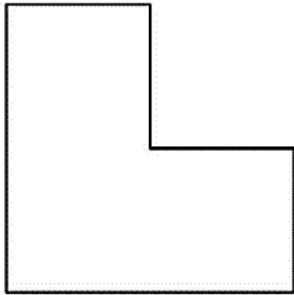
Select from the options given below, the face which is located opposite to the face depicting the triangle.



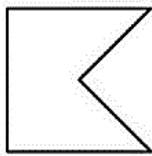
14. School Holidays will begin day after tomorrow, following which day is Sunday. The results were declared two days before yesterday. So which day is today and which day were the results declared.
 (a) Tuesday & Thursday (b) Thursday & Monday
 (c) Monday & Wednesday (d) Sunday & Tuesday

15. Sonam starts walking one evening and walks towards the South. She then turns to her right and walks five km, then turns left and walks three km, and then again turns left and walks five km.
In which direction is she from the starting point?
(a) West (b) South (c) East (d) North

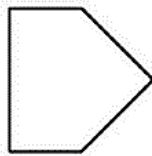
16. Which of the given shapes can be used to divide the cake below into 4 equal parts of identical size and shape?



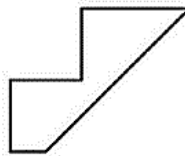
(A)



(B)

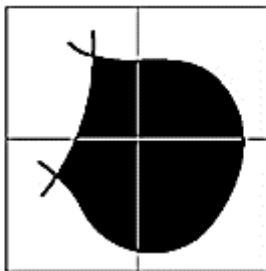


(C)



(D)

17. The completed shape can be made using which 4 tiles, without turning them in any direction.
Select the tiles that have been used to create the shape.



(P)



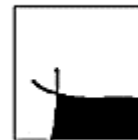
(Q)



(R)



(S)



(T)



(U)

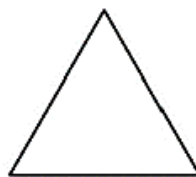

(a) SQPR

(b) TRPQ

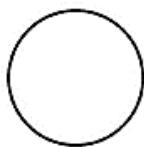
(c) QUPT

(d) TPUQ

18. Next the series will be:



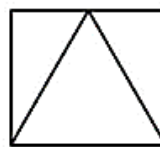
(A)



(B)

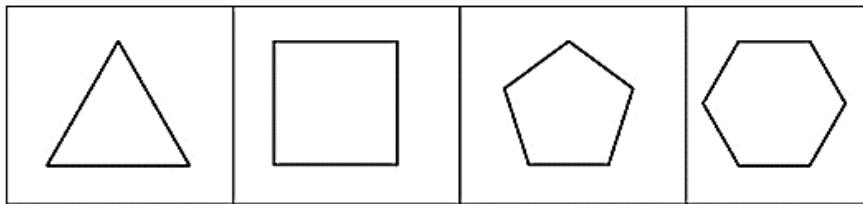
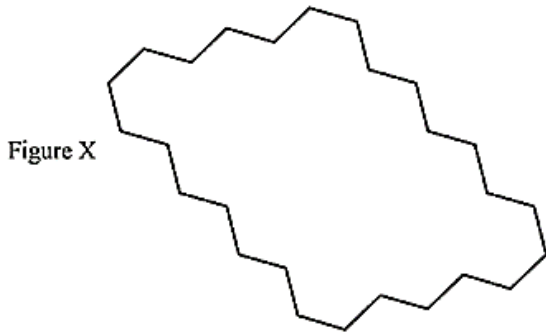


(C)



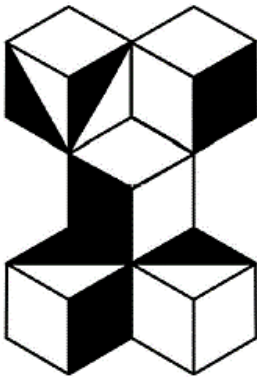
(D)

19. Shown in the optional images (1), (2), (3), (4) are regular polygons. Which among the two polygons given below will fill the Figure X?




- (1) (2) (3) (4)
 (a) (1) and (4) (b) (3) and (4) (c) (1) and (2) (d) (2) and (3)

20. What percentage of the visible figure 1s shaded?

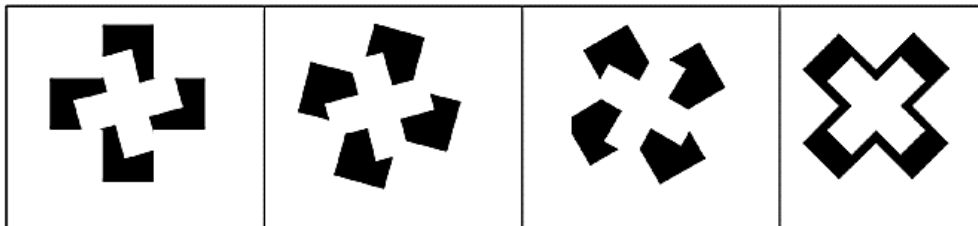


- (a) 33 % (b) 45% (c) 50% (d) 80%

21. Choose the image that completes the pattern:



Which of the shapes below continues the sequence?



- (A) (B) (C) (D)

Experience The Creative Edge Advantage



Interactive, Live Lectures by Highly Experienced Subject Matter Experts



AI-Integrated Dashboard for Consistent Performance Tracking



24x7 Regular Doubt-Clearing Support for Academic & Non-Academic Queries



Personalised 1-1 Mentorship for Strategy, Motivation & Guidance



Latest Exam Pattern-based Full-Length Mock Tests & Assignments



Highly Detailed Post-Test Evaluation after each Mock Test attempt



Practice 100% of the Syllabus with Customizable Topic & Section Tests



Regular Expert Sessions for Exam and Career-related Guidance



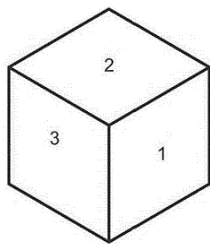

Preparation for each Step of the Selection Process, including Interview, Group Discussions



Assistance with EVERYTHING – from Form Filling to College Counselling


Part - II

22. Draw the given pattern in the 2D cut out surfaces onto the respective surfaces of the 3D cube. **(05 Mark)**



23. A drawing of a kitchen in given below. A three year old child enters the kitchen and observes the scenario from the point marked (X) on the floor. **(12 Marks)**



Visualize and draw the scene from the child's point of view.






24. Draw the following story sequentially in the given 3 frames and give a suitable title of the story. (Use only Pencil, do not use color) **(13 Marks)**

One day a man was sitting under a big Jamun tree and taking rest. Suddenly noticed a great pumpkin creeper nearby. He was thinking the foolishness of God. He thought the God gave such a small fruit to this big tree and such a big pumpkin to this fragile and thin creeper. He thought he would have appreciated God's wisdom, if he would have done otherwise. Even as he was thinking this... A small Jamun fruit fell down on the man's head and startled him. 'O God' he then bowed down and continued to say 'you are right after all. If the big fruit like pumpkin had fallen from such a height, I would surely be dead'.





Title: _____




B1 Elite Online Batch for **NID, NIFT & UCEED 2026**

- 1.5 Hours of Regular Live Classes & their Recordings
- Physical & Digital Self-Study Material Physical
- Monthly Drawing Assignments
- Monthly Aptitude Topic Tests
- Regular 1-1 Mentorship sessions

 **CLICK TO JOIN NOW**

Get **FREE** advanced college-level counseling after your exams!

25. You have an old bulb. Conceptualise 5 ways in which the bulb can be re-used humorously. Describe in brief and draw your ideas in the space given below. **(15 Marks)**



Four horizontal lines for writing notes.



Four horizontal lines for writing notes.

Self-Learning Batch for **NID, NIFT & UCEED 2025**

- 200+ Recorded Sessions
- Physical & Digital Self-Study Material Physical
- Monthly Topic Tests & Sectional Mock Tests
- 1-1 Mentorship for Academic & Non-Academic Support.

 [CLICK HERE TO KNOW MORE](#)



Creative Edge's Social Channels



INSTAGRAM

The Creative Edge by TopRankers, **Instagram Channel** is making a splash with its captivating reels, educational posts, memes, and informative content tailored for those preparing for Design and Architecture entrance exams.



TELEGRAM

The Creative Edge by Toprankers **Telegram Channel** has garnered an impressive membership. It has evolved into a central hub for students in search of academic content related to Design and Architecture.



YOUTUBE

The Creative Edge by Toprankers channel, on **YouTube Platform**, stands out as the most subscribed channel in India for Design and Architecture entrance exam preparation. Boasting many thousands of subscribers, the channel consistently uploads new videos to provide valuable content to its audience.



learnTogetherR

The Creative Edge **LearnTogetherR Community** offers remarkable insights into career fields such as Architecture and Design, serving as a valuable resource for aspiring students in various forms of content.



26. Imagine trees have started growing defensive mechanism to prevent themselves) from being cut. Conceptualise 3 such defensive mechanisms. Describe in brief and draw the ideas in the space given below. **(15 Marks)**



toprankers.

CREATIVEDGE™

अद्भुत

CREATIVEDGE

साल दर साल

BEMISAAL



RYAN GUPTA
ID AHMEDABAD

/ NID 2023



DITHYA.S
ID AHMEDABAD

/ NID 2022



ANISHK KACHCHAWA
ID VIJAYWADA

/ NID 2021



EEPIKA RANI
IFT DELHI

/ NIFT 2023



ISHA JAIN
IFT MUMBAI

/ NIFT 2022



ITANSHI AGRAWAL
IFT DELHI

/ NIFT 2021



IPIN
IT BOMBAY

/ UCEED 2023



USHAGRA SINGH
IT ROORKEE

/ CEED 2022



EHUL CHAUDHARY
IT BOMBAY

/ UCEED 2021



ARSH MITTAL
EPT UNIVERSITY

/ NATA 2023



AURI GOYAL
IRMA

/ NATA 2022



ASH TIWARI
IRMA

/ NATA 2021



KOMAL PAUL
SPA DELHI

/ JEE B.ARCH 2023



TAHER BELGAUMWALA
SPA DELHI

/ JEE B.ARCH 2022



KALYANI VASAWEE
SPA BHOPAL

/ JEE B.ARCH 2021

& Many More

You can be the next....