



toprangers.

SUPERGRADS

IPMAT 2020 OFFICIAL PAPER

QUANTITATIVE ABILITY - (SA)

- In a division problem, product of quotient and the remainder is 24 while their sum is 10. If the divisor is 5 then dividend is _____.
- The shortest distance from the point (-4, 3) to the circle $x^2 + y^2 = 1$ is _____.
- The value of $0.04^{\log_{\sqrt{5}}(\frac{1}{4} + \frac{1}{8} + \frac{1}{16} + \dots)}$ is _____.
- Suppose $\begin{vmatrix} a & a^2 & a^3 - 1 \\ b & b^2 & b^3 - 1 \\ c & c^2 & c^3 - 1 \end{vmatrix} = 0$, where a, b and c are distinct real numbers. If a = 3, then the value of abc is _____.
- The minimum value of $f(x) = |3 - x| + |2 + x| + |5 - x|$ is equal to _____.
- Ashok purchased pens and pencils in the ratio 2:3 during his first visit and paid Rs. 86 to the shopkeeper. During his second visit, he purchased pens and pencils in the ratio 4:1 and paid Rs. 112. The cost of a pen as well as a pencil in rupees is a positive integer. If Ashok purchased four pens during his second visit, then the amount he paid in rupees for the pens during the second visit is _____.
- In a four-digit number, the product of thousands digit and units digit is zero while their difference is 7. Product of the middle digits is 18. The thousands digit is as much more than the units digit as the hundreds digit is more than the tens digit. The four-digit number is _____.
- Out of 80 students who appeared for the school exams in Mathematics (M), Physics (P) and Chemistry (C), 50 passed M, 30 passed P and 40 passed C. At most 20 students passed M and P, at most 20 students passed P and C and at most 20 students passed C and M. The maximum number of students who could have passed all three exams is _____.
- Two friends run a 3 kilometer race along a circular course of length 300 meters. If their speeds are in ratio 3:2, the number of times the winner passes the other is _____.
- Out of 13 objects, 4 are indistinguishable and rest are distinct. The number of ways we can choose 4 objects out of 13 objects is _____.
- The probability that a randomly chosen factor of 10^{19} is a multiple of 10^{15} is
 (a) $\frac{1}{25}$ (b) $\frac{1}{12}$
 (c) $\frac{1}{20}$ (d) $\frac{1}{16}$
- The number of acute angled triangles whose sides are three consecutive positive integers and whose perimeter is at most 100 is
 (a) 28 (b) 29
 (c) 31 (d) 33
- The equation of the straight line passing through the point M (-5, 4), such that the portion of it between the axes is divided by the point M is to two equal halves, is
 (a) $10y - 8x = 80$ (b) $8y + 10x = 80$
 (c) $10y + 8x = 80$ (d) $8y + 10x + 80 = 0$
- The value of $\cos^2 \frac{\pi}{8} + \cos^2 \frac{3\pi}{8} + \cos^2 \frac{5\pi}{8} + \cos^2 \frac{7\pi}{8}$ is
 (a) 1 (b) $\frac{3}{2}$
 (c) 2 (d) $\frac{9}{4}$

SUPERGRADS

IPMAT + CUET Batch 2025

IPMAT Indore | IPMAT Rohtak | JIPMAT | CUET

Gear up for your upcoming entrance exams with some of the industry's finest teachers.

Join the league of 1000s of top scorers in **IPMAT & CUET now.**



PREPARE @ JUST ₹ 999

- If $\frac{1}{1^2} + \frac{1}{2^2} + \frac{1}{3^2} + \dots$ upto $\infty = \frac{\pi^2}{6}$, then value of $\frac{1}{1^2} + \frac{1}{3^2} + \frac{1}{5^2} + \dots$ upto ∞ is
 (a) $\frac{\pi^2}{8}$ (b) $\frac{\pi^2}{16}$
 (c) $\frac{\pi^2}{12}$ (d) $\frac{\pi^2}{36}$

QUANTITATIVE ABILITY - (MCQ)

16. A man is known to speak the truth on an average 4 out of 5 times. He throws a die and reports that it is a five. The probability that it is actually a five is
- (a) $\frac{4}{9}$ (b) $\frac{5}{9}$
(c) $\frac{4}{15}$ (d) $\frac{2}{15}$
17. If $\log_5 \log_8(x^2 - 1) = 0$, then a possible value of x is
- (a) $2\sqrt{2}$ (b) $\sqrt{2}$
(c) 2 (d) 3
18. Consider the following statements:
- (i) When $0 < x < 1$, then $\frac{1}{1+x} < 1 - x + x^2$.
(ii) When $0 < x < 1$, then $\frac{1}{1+x} > 1 - x + x^2$.
(iii) When $-1 < x < 0$, then $\frac{1}{1+x} < 1 - x + x^2$.
(iv) When $-1 < x < 0$, then $\frac{1}{1+x} > 1 - x + x^2$.
- Then the correct statements are
- (a) (i) and (ii) (b) (ii) and (iv)
(c) (i) and (iv) (d) (ii) and (iii)
19. Fifty litres of a mixture of milk and water contains 30 percent of water. This mixture is added to eighty litres of another mixture of milk and water that contains 20 percent of water. Then, how many litres of water should be added to the resulting mixture to obtain a final mixture that contains 25 percent of water?
- (a) 1 (b) 2
(c) 3 (d) 4
20. Three workers working together need 1 hour to construct a wall. The first worker, working alone, can construct the wall twice as fast as the third worker, and can complete the task an hour sooner than the second worker. Then, the average time in hours taken by the three workers, when working along, to construct the wall is
- (a) $(\sqrt{33} + 4)/3$ (b) $(\sqrt{33} + 5)/3$
(c) $(\sqrt{33} + 6)/3$ (d) $(\sqrt{33} + 7)/3$
21. In a class, students are assigned roll numbers from 1 to 140. All students with even roll numbers opted for cricket, all those whose roll numbers are divisible by 5 opted for football, and all those whose roll numbers are divisible by 3 opted for basketball. The number of students who did not opt for any of the three sports is
- (a) 102 (b) 38
(c) 98 (d) 42
22. Given $f(x) = x^2 + \log_3 x$ and $g(y) = 2y + f(y)$, the value of $g(3)$ equals
- (a) 16 (b) 15
(c) 25 (d) 26
23. A 2×2 matrix is filled with four distinct integers randomly chosen from the set $\{1, 2, 3, 4, 5, 6\}$. Then the probability that the matrix generated in such a way is singular is
- (a) $\frac{2}{45}$ (b) $\frac{1}{45}$
(c) $\frac{4}{15}$ (d) $\frac{1}{15}$
24. Ashok started a business with a certain investment. After few months, Bharat joined him investing half amount of Ashok's initial investment. At the end of the first year, the total profit was divided between them in ratio 3:1. Bharat joined Ashok after
- (a) 2 months (b) 3 months
(c) 4 months (d) 6 months
25. The average marks of 6 students in a test is 64. All the students got different marks, one of the students obtained 70 marks and all other students scored 40 or above. The maximum possible difference between the second highest and the second lowest marks is
- (a) 50 (b) 54
(c) 57 (d) 58
- Directions (Q.26-Q30):** The table below presents the quoted buy and sell prices of five stocks during the five trading days of a given week. The quoted sell price is the price at which an investor can sell a stock in the market. The quoted buy price is the price at which an investor can buy a stock from the market. All the quoted numbers are in Indian Rupees.

Day	Monday		Tuesday		Wednesday		Thursday		Friday	
Quote	Sell	Buy	Sell	Buy	Sell	Buy	Sell	Buy	Sell	Buy
Dabur	460	462	455	458	432	433	444	447	461	462
Marico	345	346	335	336	365	368	372	375	372	374
HUL	1931	1933	1952	1955	1979	1981	2044	2048	1966	1969
ITC	237	238	238	239	246	251	221	225	253	256
Britannia	3044	3046	3100	3101	3110	3115	3025	3027	3140	3144


26. If an investor had Rs. 36,00,000 to invest in any particular single stock, and she could buy the stock only on Monday and sell it off only on Friday, then the stock she should buy on Monday to earn the maximum possible profit during the week is
- (a) Marico (b) HUL
(c) ITC (d) Britannia
27. If an investor planned to invest Rs. 36,00,000 in purchasing the stocks of HUL on Monday, sell them off on Wednesday and use the entire proceeds to purchase the stocks of Britannia on the same day and sell them off again on Friday, then the total investment return during the week would be
- (a) 2.80 percent (b) 3.00 percent
(c) 3.20 percent (d) 3.40 percent
28. The difference between the quoted buy and sell price of a stock is referred to as the spread of the stock. The average spread of the stocks is lowest on
- (a) Monday (b) Tuesday
(c) Thursday (d) Friday
29. A brokerage firm charges 0.1 percent trading commission on the value of shares bought or sold through its trading platform. If an investor bought 1000 shares of Britannia on Tuesday, and sold all of them on Thursday, then the total brokerage fee that will be charged from the investor is
- (a) 6,125 (b) 6,126
(c) 6,127 (d) 6,128
30. If you had decided to invest Rs. 36,00,000 worth of ITC stocks on Monday, then the day of the week you should choose to sell the stocks to earn the maximum possible profit would be
- (a) Tuesday (b) Wednesday
(c) Thursday (d) Friday

toprankers SUPERGRADS[™]

JOSH-1 Year long Batch for 2025

IPMAT Indore | IPMAT Rohtak | JIPMAT | Christ University Entrance Test | NPAT | Symbiosis Entrance Test | St. Xavier's Mumbai Entrance Test

- 🔗 **600+** Live Lectures & their Recordings
- 🔗 **23+** hard copy Rankers' Study Materials
- 🔗 **100+** Full-length Mocks, 120+ Topic tests
- 🔗 **Interview Preparation** for IIM Indore from Day 1
- 🔗 **1-1 Personalized Mentorship & Performance Support**



CLICK TO ENROLL NOW

VERBAL ABILITY

Directions (Q.31-Q.36): Read the following passage and choose the answer that is closest for each of the questions that are based on the passage.

"John Muir, Earth-planet, Universe." — These words are written on the inside cover of the notebook from which the contents of this volume have been taken. They reflect the mood in which the late author and explorer undertook his thousand-mile walk to the Gulf of Mexico a half-century ago. No less does this refreshingly cosmopolitan address, which might have startled any finder of the book, reveal the temper and the comprehensiveness of Mr. Muir's mind. Even at the early age of twenty-nine his eager interest in every aspect of the natural world had made him a citizen of the universe.

On these expeditions he had disciplined himself to endure hardship, for his notebooks disclose the fact that he often went hungry and slept in the woods, or on the open prairies, with no cover except the clothes he wore.

"Oftentimes," Mr. Muir writes in some unpublished biographical notes, "I had to sleep without blankets, and also without supper or breakfast. But usually I had no great difficulty in finding a loaf of bread in the widely scattered clearings of the farmers. With one of these big backwoods loaves I was able to wander many a long, wild mile, free as the winds in the glorious forests and bogs, gathering plants and feeding on God's abounding, inexhaustible spiritual beauty bread. Only once in my long Canada wanderings was the deep peace of the wilderness savagely broken. It happened in the maple woods about midnight, when I was cold and my fire was low. I was awakened by the awfully dismal howling of the wolves, and got up in haste to replenish the fire,"

Had it not been for the accidental injury to his right eye in the month of March, 1867, he probably would have started somewhat earlier than he did. In a letter written to Indianapolis friends on the day after the accident, he refers mournfully to the interruption of a long-cherished plan, "For weeks," he writes, "I have daily consulted maps in locating a route through the Southern States, the West Indies, South America, and Europe - a botanical journey studied for years. But, alas, I am half blind. My right eye, trained to minute analysis, is lost and I have scarce heart to open the other."

The injury to his eye proved to be less serious than he had at first supposed. In June he was writing to a friend: "I have been reading and botanizing for some weeks, and find that for such work I am not very much disabled."

In an account written after the excursion he says: "I was eager to see Illinois prairies on my way home, so we went to Decatur, near the center of the State, thence, I botanized one week on the prairie about seven miles southwest of Pecatonica..... To me all plants are more precious than before. My poor eye is not better, nor worse, A cloud is over it, but in gazing over the widest landscapes, I am not always sensible of its presence."

31. "John Muir, Earth-planet, Universe," Muir wrote this in his notebook because
 - (a) He did not have a permanent address.
 - (b) He wanted to be a traveller all his life.
 - (c) His love for botany went beyond borders.
 - (d) He wanted to live in the open all his life.
32. Which of these did John Muir have no great difficulty in doing?
 - (a) Finding food among the farmers.
 - (b) Bating regularly every day.
 - (c) Sleeping without blankets on certain nights.
 - (d) Chasing wolves that howled through the nights.
33. How did the experience with nature affect John Muir?
 - (a) He felt spiritually fulfilled.
 - (b) He became a better botanist.
 - (c) He felt successful after collecting rare plants.
 - (d) He enjoyed the breeze in the glorious forests.
34. According to the passage, in what way was Muir affected by his injury?
 - (a) His injured eye healed well very slowly.
 - (b) He could not open his left eye during his exploration.
 - (c) His eyesight was affected, but he was able to carry on.
 - (d) He took a long time to consult maps and study them.
35. When Muir said that he 'botanized', he meant that he
 - (a) studied plants and made notes on them.
 - (b) studied plants in their natural habitat
 - (c) studied plants during his exploration.
 - (d) studied plants and classified them.

36. Which of these sentences is not true?
- John Muir explored several new places even on his way home.
 - There was a cloud over the landscape he travelled.
 - He was committed to being a botanist more than ever.
 - He recorded his adventures in the notebook.

Directions (Q.37-Q.42): Complete the following sentences by choosing the appropriate word/phrase from the options given below.

37. It came as a shock to me that my friend had lost the _____ he had built carefully over the years when in a moment of madness he lent all of it to his neighbour.
- nest egg
 - nests and eggs
 - bird's nest
 - nestled eggs
38. During the debate, when the minister appeared to be vague about his stand on the controversial energy project, his opponent asked him to _____ and declare outright if the government would go ahead with the project or not.
- be curt to the face
 - cut to the chase
 - curb the farce
 - cut globe
39. It is irritating when co-workers dismiss your ideas as worthless, and later, present those very ideas as their own. They just want to _____
- steal your credit
 - steal your crown
 - steal your thunder
 - steal your gloating
40. Before the start of the meeting, I am _____ on the latest developments.
- taking you through
 - going to share
 - going to bring you up to speed
 - going to be explaining
41. Despite statistics to prove that there was a slowdown in the economy of the country, the professor was _____ about it.
- in affirmation
 - in denial
 - in protest
 - in shock
42. After the unearthing of relics at the archaeological site, the historian was asked to _____ the significance of the discovery.
- throw light on
 - shed meaning on
 - turn light on
 - focus meaning on

Directions (Q.43-Q.45): Choose the alternative so that the underlined part of the sentence is rendered correct.

43. The pharmaceutical company hired a consultant to supervise a taskforce studying lower salaries as to their effects on employees' morale.
- studying what the effects lower salaries would have on employees' morale
 - studying the effects of lower salaries on employee morale
 - for studying what are the effects in employees' morale that lower salaries would cause
 - studying the effects of employee morale on lower salaries
44. Besides offering physiological rewards such as toned muscles, when regular karate is practiced the body can be turned into a dangerous weapon.
- one can turn the body into a dangerous weapon through karate, if it is practiced regularly
 - the body can be turned into a dangerous weapon as a result of karate if practiced regularly
 - when karate is practiced regularly, the body can be turned into a dangerous weapon
 - karate, if practiced regularly, can turn the body into a dangerous weapon
45. The animal activist has raised awareness not only on the plight of abandoned dogs, but also on overworked bulls and temple elephants.
- on the plight of not only the abandoned dogs, but also on those of overworked bulls
 - not only on the plight of the abandoned dogs, but also on that of overworked bulls
 - the plight of abandoned dogs, as well as the over worked bulls
 - the plight of abandoned dogs, but also on overworked bulls

Directions(Q.46-Q.47): Each of the paragraphs given below has a sentence missing which is indicated by a blank. From the choices given below each paragraph, choose the sentence that seems most logically appropriate to complete the paragraph.

46. When people move from one city or country to another, the spread of diseases may result. People often bring in germs which may not have been present there before. These new germs can spread quickly and cause previously unknown diseases.

- _____ . They become ill more easily and could even die. In turn, newcomers may catch diseases which were not present where they came from.
- (a) If they had gone back, they would have started an epidemic.
 (b) Pollution also can lead to the spread of disease.
 (c) If a germ is completely new to a region, people have no natural protection against it.
 (d) Such changes may result in enhancing conditions for people who live in big cities.
47. Samar, a young man from a village in Tripura is a social media star who hopes to make it big as a model and actor. While his minute-long videos are very popular, his series titled, "Who wore it better?" showcases his creative side. He uses a variety of filters and visual effects to improve his videos.
- _____
- (a) It is clear that short videos are very popular among the youth than television.
 (b) This is one of the ways young men make money on the internet.
 (c) It is possible to *be* popular on the internet, although making money here is difficult.
 (d) This shows how it is possible today for people with limited resources to express their creativity.
- Directions (Q.48-Q.52):** The sentences below have words that are missing. Choose the best option from those given below to complete the sentence.
48. Coral reefs are one of the most _____ , biologically complex, and diverse marine ecosystems on Earth. This ecosystem is one of the _____ paradoxes of the biosphere: how do clear, and thus nutrient-poor, waters support such _____ and productive communities?
- (a) common, sensitive, fruitful
 (b) fragile, fascinating, prolific
 (c) deep, strange, exuberant
 (d) frail, unrecognised, wealthy
49. It is a _____ to live in a land without _____. Even with all the technological advancement and economic growth, there are still millions who live in war zones where life every day is filled with _____.
- (a) coincidence, prejudice, adventures
 (b) privilege, bigotry, terror
 (c) lovely, pride, episodes
 (d) punishment, hate, agony
50. The ability to _____ and _____ a cohesive team is particularly critical in hi-tech firms where the _____ landscape can shift dramatically in the face of disruptive technologies.
- (a) mentor, keep, sustainable
 (b) shape, guide, competitive
 (c) drive, maintain, tectonic
 (d) involve, manage, green
51. Cool-headed and rational, Jo Eun-cha is a talented and driven anchorman who commands as well as demands respect. After _____ to get elected as a news director, he aims to _____ to his job as the top news anchor to increase his _____ of being elected the next year.
- (a) happening, quit, hopes
 (b) failing, return, chances
 (c) hoping, upgrade, certainty
 (d) going, give up, luck
52. A collective investment fund (CIF), also known as a collective investment trust (CIT), is a group of _____ accounts held by a bank or trust company. The financial institution assets from individuals and organizations to _____ a single larger, diversified portfolio.
- (a) diverse, discounts, conceive
 (b) different, collected, simulate
 (c) financial, covered, synthesise
 (d) pooled, groups, develop
53. **Direction:** One of the statements below contains a word used incorrectly. Choose the option which has the incorrect or inappropriate usage of the word.
- (a) The President of the City Chamber of Commerce is an urbane, kindly and generous man.
 (b) The writer's next book deals with the life of an urbane intellectual as seen through the eyes of a lawyer,
 (c) My uncle who lives in New York turned out to be the exact opposite of the urbane, wealthy gentleman that I was expecting to meet,
 (d) Over 70% of the people living in urbane areas said that they wanted belter roads and more schools.

SUPERGRADS[™]

IPM Astra Test Series

Practice with:

- 18 IPMAT Mock Tests
- Exclusive IPMAT Level-up Mock Tests for IPMAT+ level candidate
- 500 of the most important questions for 2020s IPM exams

- Get detailed Graphical Analysis for every single test.
- Access post-test solutions' explanation on video.
- Take multiple Topic Tests to hone your section-wise preparation.



PREPARE @ JUST ₹ 999

54. Direction: One of the statements below contains a word used incorrectly. Choose the option which has the incorrect or inappropriate usage of the word.

- (a) The young scientist built a small, low-cost machine to recycle waste water. It was a simple but ingenious solution to die problem of water shortage in the city.
- (b) My friend is an ingenious cook - she can make very delicious dishes from the most ordinary ingredients.
- (c) The young man lost all his savings because he was rather ingenious to believe the agent's promises of a well-paid job and a comfortable life in a foreign country,
- (d) Teachers say that some children are very ingenious when it comes to finding excuses for not completing their work.

55. Direction: One of the statements below contains a word used incorrectly. Choose the option which has the incorrect or inappropriate usage of the word.

- (a) After several rounds of meetings, the city council passed an ordinance to limit the number of cafes near the seaside.
- (b) As per a royal ordinance, all men under 18 had to join die army and fight the war.
- (c) Military aircrafts can he used to curry a wide variety of ordinance.
- (d) The people pro tested a city ordinance that all parks must be closed by9 pm.

56. Direction: One of the statements below contains a word used incorrectly. Choose the option which has the incorrect or inappropriate usage of the word.

- (a) It is a pleasure when we are all together for a meal at home.
- (b) Her son is not interested in watching movies, which is not all together a bad thing.
- (c) The three hundred guests sat all together in the large dining hall of the hotel.
- (d) The facilitator asked the participant to stand up, all together.

57. Direction: One of the statements below contains a word used incorrectly. Choose the option which has the incorrect or inappropriate usage of the word.

- (a) The sickness of a family member can affect the lives of everyone at home.
- (b) Kerala was affected by severe Hood all through the year.
- (c) Taking this medicine for a prolonged period can have severe after affects.
- (d) The popular star was not a natural actor; his style was rather affected.

58. Direction: The sentences given below, when properly sequence*!, form a coherent paragraph. Each sentence is labelled with a number. Decide on the most logical order and enter the sequence of numbers in the space provided.

- (a) However, they stand out because they help the film maker realize his personal artistic vision.
- (b) An Indie film refers to independent films made outside a major studio system.
- (c) Their release is also limited to a few screens, although there have been films with a wide release.
- (d) Most of such dims arc low budget films produced and distributed by small companies.

59. Direction: The sentences given below, when properly sequence*!, form a coherent paragraph. Each sentence is labelled with a number. Decide on the most logical order and enter the sequence of numbers in the space provided.

- (a) Mental illness continues to struggle for recognition as a significant contributor to poor health in spite of the existence of the Mental Healthcare Act 2017.
- (b) The data reveals that an estimated one in seven Indians -or 197 million persons- suffered from

mental disorders, at varying degrees of severity, in 2017.

- (c) There is always more to human health than meets the eye.
- (d) This is particularly important in the Indian cultural and political context, where the outward appearance of physical well-being is often considered the only visible marker of overall health.

60. Direction: The sentences given below, when properly sequence*, form a coherent paragraph. Each sentence is labelled with a number. Decide on the most logical order and enter the sequence of numbers in the space provided.

- (a) It was felt that the major polluters had a moral obligation to deliver on the agreements reached some years ago during a similar convention on Climate Change.
- (b) The papers presented indicated that the impacts of current warming are much more severe than previously understood.
- (c) It appears that the planet's ability to adapt to and cope with how it is being treated is fraying.
- (d) For example, the acceleration of sea level rise and ocean warming, and increasing risks of reaching limits to adaptation.
- (e) This is what emerged at a recent conference attended by the largest scientific community on climate science.

Experience The Supergrads Advantage



Interactive, Live Lectures by Highly Experienced Subject Matter Experts



AI-Integrated Dashboard for Consistent Performance Tracking



24x7 Regular Doubt-Clearing Support for Academic & Non-Academic Queries



Personalised 1-1 Mentorship for Strategy, Motivation & Guidance



Latest Exam Pattern-based Full-Length Mock Tests & Assignments



Highly Detailed Post-Test Evaluation after each Mock Test attempt



Practice 100% of the Syllabus with Customizable Topic & Section Tests



Regular Expert Sessions for Exam and Career-related Guidance



Preparation for each Step of the Selection Process, including Interview, Group Discussions

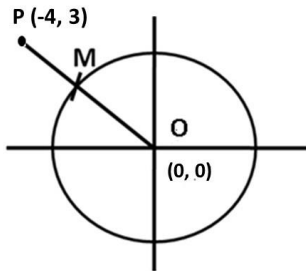


Assistance with EVERYTHING - from Form Filling to College Counselling

ANSWER KEY AND SOLUTIONS

QUANTITATIVE ABILITY (SA)

- We know, Dividend = Divisor × Quotient + Remainder
Given, Divisor = 5
 $Q \cdot R = 24$
 $Q + R = 10$ Using hit and trial $Q = 6$ and $R = 4$
R will be 4 as remainder cannot be greater than the divisor.
Substituting, we get Dividend (n) = $5 \times 6 + 4 = 34$.
- Given equation is of a circle with centre at (0, 0) and radius = 1 unit.



$$x^2 + y^2 = 1^2$$

$$PM = PO - MO$$

$$= PO - \text{Radius}$$

$$= \sqrt{(-4 - 0)^2 + (3 - 0)^2}$$

$$= \sqrt{16 + 9}$$

$$= \sqrt{25}$$

$$= 5$$

So, $PM = 5 - 1 = 4$ units.

3. Solution

$$0.04^{\log_{\sqrt{5}}\left(\frac{1}{4} + \frac{1}{8} + \frac{1}{16} + \dots\right)}$$

$$= \left(\frac{4}{100}\right)^{\log_{\sqrt{5}}\left(\frac{1}{1 - \frac{1}{2}}\right)}$$

$$= \left(\frac{1}{5^2}\right)^{\log_{\sqrt{5}}\left(\frac{1}{\frac{1}{2}}\right)}$$

$$= 5^{-2 \times 2 \log_5\left(\frac{1}{2}\right)} \quad (\because \log_b x a = \frac{1}{x} \log_b a)$$

$$= 5^{-4 \cdot \log_5\left(\frac{1}{2}\right)}$$

$$= 5^{\log_5\left(\frac{1}{2}\right)^{-4}}$$

$$= 5^{\log_5 2^4}$$

$$= 5^{\log_5 16}$$

$$= 16 \quad (\because a^{\log_a x} = x)$$

4. Solution

$$\begin{vmatrix} a & a^2 & a^3 - 1 \\ b & b^2 & b^3 - 1 \\ c & c^2 & c^3 - 1 \end{vmatrix} = 0$$

$$\Rightarrow \begin{vmatrix} a & a^2 & a^3 \\ b & b^2 & b^3 \\ c & c^2 & c^3 \end{vmatrix} + \begin{vmatrix} a & a^2 & -1 \\ b & b^2 & -1 \\ c & c^2 & -1 \end{vmatrix} = 0$$

(using sum property)

$$\Rightarrow abc \begin{vmatrix} 1 & a & a^2 \\ 1 & b & b^2 \\ 1 & c & c^2 \end{vmatrix} - \begin{vmatrix} a & a^2 & 1 \\ b & b^2 & 1 \\ c & c^2 & 1 \end{vmatrix} = 0$$

(using scalar multiple property)

$$\Rightarrow abc \begin{vmatrix} 1 & a & a^2 \\ 1 & b & b^2 \\ 1 & c & c^2 \end{vmatrix} + \begin{vmatrix} 1 & a^2 & a \\ 1 & b^2 & b \\ 1 & c^2 & c \end{vmatrix} = 0$$

(using switching property twice)

$$\Rightarrow abc \begin{vmatrix} 1 & a & a^2 \\ 1 & b & b^2 \\ 1 & c & c^2 \end{vmatrix} - \begin{vmatrix} 1 & a & a^2 \\ 1 & b & b^2 \\ 1 & c & c^2 \end{vmatrix} = 0$$

$$\Rightarrow (abc - 1) \begin{vmatrix} 1 & a & a^2 \\ 1 & b & b^2 \\ 1 & c & c^2 \end{vmatrix} = 0$$

$$\Rightarrow \text{either } (abc - 1) = 0 \text{ or } \begin{vmatrix} 1 & a & a^2 \\ 1 & b & b^2 \\ 1 & c & c^2 \end{vmatrix} = 0$$

Value of determinant cannot be 0 as a, b and c are distinct real numbers therefore $abc - 1 = 0$. Thus $abc = 1$.

SUPERGRADS

JOSH-1 Year long Batch for 2025

IPMAT Indore | IPMAT Rohtak | JIPMAT | Christ University Entrance Test | NPAT | Symbiosis Entrance Test | St. Xavier's Mumbai Entrance Test

- ✦ **600+** Live Lectures & their Recordings
- ✦ **23+** hard copy Ranners' Study Materials
- ✦ **100+** Full-length Mocks, 120+ Topic tests
- ✦ **Interview Preparation** for IIM Indore from Day 1
- ✦ **1-1 Personalized Mentorship & Performance Support**



CLICK TO ENROLL NOW

5. Solution

Minimum value of such function always comes at a critical point. In the equation, there are three critical points

$$\left. \begin{array}{l} 3 - x = 0 \quad x = 3 \\ 2 + x = 0 \quad x = -2 \\ 5 - x = 0 \quad x = 5 \end{array} \right\} 3 \text{ critical points}$$

Arrange these critical point in increasing order,
-2, 3, 5

So, minimum value will be obtained at middle critical point i.e. at 3.

$f(3)$ = Minimum value of the function

$$\begin{aligned} f(3) &= |3 - 3| + |2 + 3| + |5 - 3| \\ &= 0 + 5 + 2 = 7 \end{aligned}$$

6. **Solution**

On 2nd day the equation of total cost will be $4A + 1B = 112$

where A and B are the cost of a pen and a pencil respectively.

1st day, he bought pen and pencil in the ratio 2 : 3 so

Case I : Let us assume he bought 2 Pens and 3 pencils

We will get the equation $2A + 3B = 86$.

Case II : Let us assume he bought 4 Pen and 6 pencils.

Then the equation of total cost will be $4A + 6B = 86$

We can say, that Case II Is not possible on 2nd day as

$$4A + B = 112 \text{ (by 2nd day equation)}$$

$$\therefore 4A + 6B > 112$$

It cannot be 86.

So only case I is possible

\therefore we get two simultaneous equations,

$$2A + 3B = 86$$

$$4A + B = 112$$

Solving these two equations for A, we get

$$A = 25$$

So the cost of 4 pens on 2nd day will be ₹ 100.

7. **Solution**

Let the 4 digit number be A, B, C, D

Condition 1: $A \times D = 0$

It mean either A or D is '0'

But A cannot be zero, as a 4 digit no. cannot start with 0 therefore $D = 0$.

Condition 2: $A - D = 7$

Therefore $A - 0 = 7$

$$A = 7$$

Condition 3: $B \times C = 18$

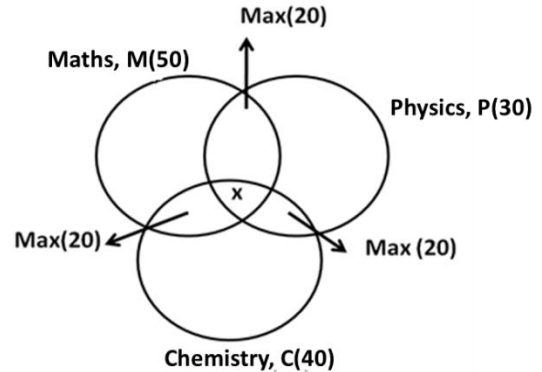
either 9×2

or 6×3

Condition 4: $B - C = A - D = 7$

So B and C Should be only be 9 and 2 respectively.
So the number is 7920.

8. **Solution**



$$\begin{aligned} n(M \cup P \cup C) &= n(M) + n(P) + n(C) - n(M \cap P) \\ &\quad - n(M \cap C) - n(P \cap C) \\ &\quad + n(M \cap P \cap C) \\ n(M \cup P \cup C) + [n(M \cap P) + n(M \cap C) + n(P \cap C)] \\ &= [n(M) + n(P) + n(C)] \\ &= n(M \cap P \cap C) \end{aligned}$$

In order the maximize = $n(M \cap P \cap C)$,

$$\left. \begin{array}{l} n(M \cup P \cup C) \& \\ n(M \cap P), n(M \cap C) \\ n(P \cap C) \end{array} \right\} \text{ should be maximum.}$$

$$\begin{aligned} \text{Substituting their maximum value we get} \\ 80 + [20 + 20 + 20] - [50 + 30 + 40] = \\ n(M \cap P \cap C)_{\text{max}} \\ n(M \cap P \cap C)_{\text{max}} = 20 \end{aligned}$$

9. **Solution**

Total length of race = 3000 m

One who completes 10 rounds first will win the race.

The ratio of their speed = 3 : 2

It means they will meet only at 1 (by doing 3-2) point which is starting point.

Let the speed be $3x$ & $2x$.

Time for their 1st meeting at starting point

$$\begin{aligned} &= \text{LCM} \left(\frac{300}{3x}, \frac{300}{2x} \right) \\ &= \frac{300}{x} \end{aligned}$$

By this time, distance by the faster one is $\frac{300}{x} \times 3x = 900\text{m}$.

By 3rd meeting he would have covered 2700m.

So, by the time faster one finishes the race (3000m) he would have met slower person 3 times.

10. Solution

	Distinct Objects (9)	Number of ways of selection
Case I	Choose 4	9C_4 ways
Case II	Choose 3	9C_3 ways
Case III	Choose 2	9C_2 ways
Case IV	Choose 1	9C_1 ways
Case V	Choose 0	9C_0 ways

	Identical Objects (4)	Number of ways of selection
×	Choose 0	1 way
×	Choose 1	1 way
×	Choose 2	1 way
×	Choose 3	1 way
×	Choose 4	1 way

After adding all these cases we get,
 ${}^9C_4 \times 1 + {}^9C_3 \times 1 + {}^9C_2 \times 1 + {}^9C_1 \times 1 + {}^9C_0 \times 1 = 256$

11. Solution

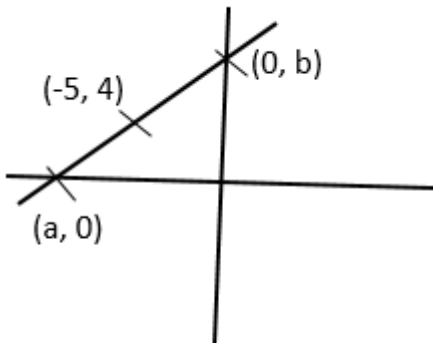
$10^{19} = 5^{19} \times 2^{19}$
 Total no. of factors of $10^{19} = (19 + 1)(19 + 1)$
 $= 20 \times 20$
 $= 400$
 We can write $10^{19} = 10^{15}(10^4)$
 $= 10^{15} \times (5^4 \times 2^4)$
 So we can say, number of factors which are multiple of 10^5 as well $= (4+1)(4+1)$
 $= 5 \times 5 = 25$
 So, the probability $= \frac{25}{400} = \frac{1}{16}$

12. Solution

Properties of acute angle triangle is
 $c^2 < a^2 + b^2$
 Where, c is the largest side of the triangle
 Given: Perimeter should be less than or equal to 100.
 Let the sides be a, b & c
 $a + b + c \leq 100$
 Set of sides satisfying above condition will be
 $\Rightarrow (1,2,3), (2,3,4), (3,4,5), (4,5,6) \dots (32,33,34)$
 Total 32 cases

Out of these, first 3 cases can be eliminated as they do not follow properties of acute angle triangle.

13. Solution



Using mid point formula,

$$\begin{array}{l|l} a + 0 & 0 \\ \hline 2 & \\ \hline = -5 & \\ b + 0 & \\ \hline 2 & \\ \hline = 4 & \end{array}$$

So, the equation of line passing through $(-10,0)$ and $(0,8)$ is given by
 $y - 0 = \frac{8-0}{0-(-10)} \times (x + 10)$

$$10y = 8(x+10)$$

$$10y - 8x = 20$$

Alternatively,

Check which of the given equation is satisfied by point $(-5,4)$. Only 1st option is satisfied.

14. Solution

$$\cos^2 \frac{\pi}{8} + \cos^2 \frac{3\pi}{8} + \cos^2 \frac{5\pi}{8} + \cos^2 \frac{7\pi}{8}$$

$$\cos^2 \frac{\pi}{8} + \cos^2 \frac{3\pi}{8} + \cos^2 \left(\pi - \frac{3\pi}{8}\right) + \cos^2 \left(\pi - \frac{\pi}{8}\right)$$

$$\because -\cos \theta = \cos(\pi - \theta)$$

or

$$\cos^2 \theta = \cos^2(\pi - \theta)$$

$$= \cos^2 \frac{\pi}{8} + \cos^2 \frac{3\pi}{8} + \cos^2 \frac{3\pi}{8} + \cos^2 \frac{\pi}{8}$$

$$= 2\cos^2 \frac{\pi}{8} + 2\cos^2 \frac{3\pi}{8}$$

$$= 2 \left[\cos^2 \frac{\pi}{8} + \cos^2 \frac{3\pi}{8} \right] = 2 \times 1 = 2$$

$$\because \cos^2 A + \cos^2 B = 1$$

If $A + B = 90^\circ$

15. Solution

Given $\frac{1}{1^2} + \frac{1}{2^2} + \frac{1}{3^2} + \dots \propto \frac{x^2}{6}$

$$\frac{1}{1^2} + \frac{1}{3^2} + \frac{1}{5^2} + \dots \propto \left(\frac{1}{2^2} + \frac{1}{4^2} + \frac{1}{6^2} + \dots \propto \right) = \frac{x^2}{6}$$

$$\frac{1}{1^2} + \frac{1}{3^2} + \frac{1}{5^2} + \dots \propto \frac{x^2}{6} - \left(\frac{1}{2^2} + \frac{1}{4^2} + \frac{1}{6^2} + \dots \propto \right)$$

$$= \frac{x^2}{6} - \frac{1}{2^2} \left(1 + \frac{1}{2^2} + \frac{1}{3^2} + \dots \propto \right)$$

$$\begin{aligned}
 &= \frac{x^2}{6} - \frac{1}{2^2} \left(1 + \frac{1}{2^2} + \frac{1}{3^2} + \dots \infty\right) \\
 &= \frac{x^2}{6} - \frac{1}{4} \left(\frac{x^2}{6}\right) \\
 &= \frac{3}{4} \cdot \frac{x^2}{6} = \frac{x^2}{8}
 \end{aligned}$$

$$\begin{aligned}
 2 &> \frac{7}{4} \\
 \therefore \frac{1}{1+x} &> 1 - x + x^2 \\
 \therefore \text{(iii) is incorrect \& (iv) is correct therefore i \& iv} \\
 &\text{satisfy the condition.}
 \end{aligned}$$

QUANTITATIVE ABILITY (MCQ)

16. (a) $P(S_1)$ = Probability that men speaks truth = $\frac{4}{5}$
 $P(S_2)$ = Probability that men speaks lies
 $= 1 - P(S_1) = 1 - \frac{4}{5} = \frac{1}{5}$
 $P(E/S_1)$ = Probability that five appears on the die, if the man speaks the truth. = $\frac{1}{6}$
 $P(E/S_2)$ = Probability that, 5 appears on the die, if the men lies = $1 - \frac{1}{6} = \frac{5}{6}$

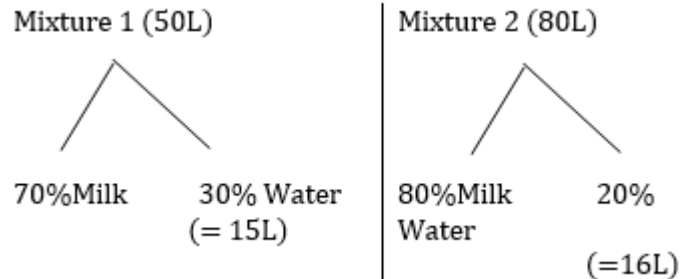
Required Probability

$$\begin{aligned}
 &= \frac{P(S_1) \cdot P\left(\frac{E}{S_1}\right)}{P(S_1) \cdot P\left(\frac{E}{S_1}\right) + P(S_2) \cdot P\left(\frac{E}{S_2}\right)} \\
 &= \frac{\left(\frac{4}{5}\right) \times \frac{1}{6}}{\frac{4}{5} \times \frac{1}{6} + \frac{1}{5} \times \frac{5}{6}} = \frac{\frac{4}{30}}{\frac{4}{30} + \frac{1}{6}} = \frac{4}{9}
 \end{aligned}$$

17. (d) Given $\log_5 \log_8(x^2 - 1) = 0$
 $\log_8(x^2 - 1) = 5^0 = 1$ (we know if $\log_x a = n$, then $a = x^n$)
 $x^2 - 1 = 8^1$
 $x^2 = 9$
 $x = \pm 3$
 Out of given choices $x = 3$ will be right option.

18. (c) Consider (i) and (ii)
 Let $x = \frac{1}{2}$
 $\frac{1}{1+x} = \frac{1}{1+\frac{1}{2}} = \frac{1}{\frac{3}{2}} = \frac{2}{3}$
 &
 $1 - x + x^2 = 1 - \frac{1}{2} + \frac{1}{4} = \frac{1}{2} + \frac{1}{4} = \frac{3}{4}$
 $\therefore \frac{1}{2} < \frac{3}{4}$
 $\frac{1}{1+x} < 1 - x + x^2$
 \therefore (i) is correct (ii) is incorrect
 Consider (iii) & (iv)
 Let $x = -\frac{1}{2}$
 $\frac{1}{1+x} = \frac{1}{1-\frac{1}{2}} = \frac{1}{\frac{1}{2}} = 2$
 $1 - x + x^2 = 1 - \left(-\frac{1}{2}\right) + \left(-\frac{1}{2}\right)^2 = 1 + \frac{1}{2} + \frac{1}{4} = \frac{7}{4}$

19. (b)



So adding these two solution,
 We get 130L of resultant solution.
 Quantity of water = (15+16)L = 31L
 Now, if 'x' L of water be added to above 130L of resultant solution,

$$\begin{aligned}
 \text{Total quantity of water} &= 31 + x = 25\% (130 + x) \\
 31+x &= \frac{1}{4} (130 + x) \\
 124+4x &= 130+x \\
 3x &= 6 \\
 x &= 2L.
 \end{aligned}$$

20. (a) Let the 1st worker takes t hours to complete the work.
 Then, the hours taken by 3rd worker to complete the work = 2t
 & by 2nd worker = t + 1
 As per the question,
 $\frac{1}{t} + \frac{1}{t+1} + \frac{1}{2t} = \frac{1}{1}$
 Solving above equation we get
 $t = \frac{3+\sqrt{33}}{4}$.

Then, average of time taken by each of the worker will be = $\frac{t+t+1+2t}{3}$

Substituting value of 't', we get = $\frac{\sqrt{33}+4}{3}$

21. (b) Student opted for cricket = Even roll numbers = $\left[\frac{140}{2}\right] = 70$; where [x] is Greatest Integer Function.
 Student opted for football = multiple of 5 = $\left[\frac{140}{5}\right] = 28$.
 Student opted for football = multiple of 3 = $\left[\frac{140}{3}\right] = 46$.
 Students opted for cricket & football

= multiple of 2 & 5 = multiple of 10 = $\left[\frac{140}{10}\right] = 14$

Students opted for cricket & basketball

= multiple of 2 & 3 = multiple of 6 = $\left[\frac{140}{6}\right] = 23$

Student opted for football & basketball

= multiple 3&5 = multiple of 15 = $\left[\frac{140}{15}\right] = 9$

Student opted for all 3 sports.

= multiple of 2&3 & 5 = multiple of 30 = $\left[\frac{140}{30}\right] = 4$

So, students opted for at least one of the sport =

$$n(C \cup F \cup B) = n(C) + n(P) + n(B) - n(C \cup F) - n(F \cap B) - n(C \cap B) + n(C \cap F \cap B).$$

$$= 70 + 28 + 46 - 14 - 23 - 9 + 4 = 148 - 46 = 102$$

So the student who did not opted for any sport

$$= 140 - 102 = 38$$

22. **(a)** $f(x) = x^2 + \log_3 x$; $g(y) = 2y + f(y)$

We have to find $g(3)$

$$g(3) = 2 \times 3 + f(3)$$

$$= 6 + f(3) \dots \dots \dots (1)$$

Again $f(3) = 3^2 + \log_3 3$

$$= 9 + 1 = 10$$

Substituting in equation (1)

$$g(3) = 6 + 10 = 16.$$

23. **(b)** Let $A = \begin{vmatrix} a & c \\ d & b \end{vmatrix}$

For singular matrix, $|A| = 0$

$$ad - bc = 0$$

$$\text{Desired Probability} = \frac{\text{Number of favourable outcome}}{\text{Number of total outcome}}$$

$$\text{Total outcome} = {}^6C_4 \times 4! = {}^6P_4 = \frac{6!}{2!}$$

$$= 360$$

Let us assume a, b, c, d. which satisfy required condition i.e., $ad - bc = 0$ or $ad = bc$.

5 cannot be used in place of a, b, c or d. Their values can only be chosen from (1, 2, 3, 4, 6)

Case I $\begin{vmatrix} 1 & 2 \\ 3 & 6 \end{vmatrix}$. These 4 can be arranged in 4 ways

Case II $\begin{vmatrix} 2 & 3 \\ 4 & 6 \end{vmatrix}$. These 4 can again be arranged in 4 ways

Total number of favourable outcome = 8

$$\therefore \text{Required probability} = \frac{8}{360} = \frac{1}{45}$$

24. **(d)** We know Profit share \propto Investment \times Time of Investment

$$P \propto I \times T$$

$$P_A : P_B = (I_A \times 12) : \left(\frac{I_A}{2} \times x\right)$$

$$3 : 1 = 12 : \frac{x}{2}$$

$$3 : 1 = 24 : x$$

when, 'x' is time of investment of Bharat (in months)

$$3 : 1 = 24 : x$$

$$\therefore x = 8 \text{ month.}$$

It means Bharat join Ashok after 4 months.

25. **(b)** Sum of scores of 6 students = 6×64

Let A, B, C, D, E be the distinct scores of rest of the 5 students in increasing order.

$$(A < B < C < D < E)$$

$$A + B + C + D + E + 70 = 384$$

$$A + B + C + D + E = 314$$

We have to find maximum difference between second highest & second smallest score.

So by observing above equation, it can be said that in order to maximize both D and E we need to keep the values of A, B and C as low as possible.

$$\text{So let } A = 40, B = 41 \text{ \& } C = 42$$

Substituting these values in the equation we get $40 + 41 + 42 + D + E = 314$.

$$D + E = 314 - 123$$

$$D + E = 191$$

In order to get maximum number of D

D & E should be as close as possible.

$$\text{So } D = 95 \text{ and } E = 96$$

$$\text{Therefore, } D - B = 95 - 41 = 54$$

26. **(a)** Investment = ₹36 lakh.

In order to get maximum profit, final income should be maximum.

Option (a) Marico.

$$\text{No. of shares purchase on Monday (N)} = \frac{36 \text{ lakh}}{346}$$

Income on selling these shares on Friday = $N \times$ share price on Friday

$$= \frac{36 \text{ lakh}}{346} \times 372$$

$$= 36 \text{ lakh} \times \frac{372}{346} = 36 \text{ lakh} \times 1.07$$

Option (b) Income from selling HUL shares = $36 \text{ lakh} \times \frac{1966}{1933} = 36 \text{ lakh} \times 1.01$

Option (c) Income from selling ITC shares = $36 \text{ lakh} \times \frac{253}{238} = 36 \text{ lakh} \times 1.06$

Option (d) Income from selling Britannia shares = $36 \text{ lakh} \times \frac{314}{3046} = 36 \text{ lakh} \times 1.03$

We can say that she should buy shares of Marico to get maximum profit.

27. **Solution**

Investment amount = 36 lakhs.

Number of HUL shares bought on Monday (n)

$$= \frac{36 \text{ lakh}}{1933}$$

Above number of shares were sold on Wednesday,

$$\text{So Income on Wednesday} = \left(\frac{36 \text{ lakh}}{1933} \times 1979\right) \text{ ₹}$$

With above amount Britannia shares were bought on same day (Wednesday)

Example:-

$$\text{No. of shares of Britannia purchase} = \left(\frac{36 \text{ lakh}}{1933} \times\right.$$

$$\left. 1979\right) \times 3115$$

Income by selling Britannia shares on Friday =

$$\left(\frac{36 \text{ lakh} \times 1979}{1933 \times 3115}\right) \times 3140.$$

$$= 37.15 \text{ lakh.}$$

$$\% \text{ return} = \frac{\text{Income} - \text{investment}}{\text{investment}} \times 100$$

$$= \left(\frac{37.15 - 36}{36}\right) \times 100 = 3.19\%$$

28. (a) As the spread of each stock is observed to be less on Monday as compared to on other days, their average too will also be less on Monday.
29. (b) Amount invested for buying 1000 share of Britannia of Tuesday = ₹ (1000 × 3101)
Income by selling 1000 share of Britannia of Thursday
= ₹ (1000 × 3025)
Total brokerage = 0.1% [3101000 + 3025000]
= ₹ 6126
30. (d) Higher the selling price, higher the profit. Then, by observation it is Friday.

IPMAT + CUET Batch 2025

IPMAT Indore | IPMAT Rohtak | JIPMAT | CUET

Gear up for your upcoming entrance exams with some of the industry's finest teachers.

Join the league of 1000s of top scorers in **IPMAT & CUET now.**



VERBAL ABILITY & READING COMPREHENSION

31. (c) Option a, b and d will be eliminated as the passage doesn't state any of these explicitly or implicitly. Read the last line of the first para.. Even at the...universe. This line clearly suggests that his love for botony (nature) went beyond borders (made him the citizen of the world).
32. (a) This is a direct answer to a direct question. Read the 2nd line of the third paragraph.
33. (a) Option b can be eliminated as the passage doesn't talk about him becoming a better botanist. Similarly, it doesn't talk about Muir feeling successful after collecting rare plants. Option d is a distortion. Option a is the closest correct option as per the 4th and 5th line of the third paragraph.
34. (d) The last part of the fourth paragraph clearly suggests that due to the injury in his right eye, he could no longer consult the maps as he usually did.
35. (b) Option a and d can be eliminated as nothing is mentioned in the passage about Muir making notes or classifying the plants. Option b is a better choice than option c as the latter suggests that he went exploring and studied plants on the way when it was the other way around (as clearly stated in the last line of the first paragraph that his love for nature made him an explorer). Therefore option b is the most appropriate option.
36. (b) Option d is true. Read the last paragraph. He recorded his adventures in his notebook. This is mentioned clearly in the second paragraph. Option C is not mentioned anywhere in the passage. To have a cloud over your head means a situation that makes you worry or feel unhappy. So the line A cloud is over it in the last paragraph doesn't literally mean that there was a cloud over his head. Therefore option b is the right answer.
37. (a) A nest egg means sum of money saved for the future.
38. (b) cut to the chase means come to the point.

39. (c) Steal your thunder means to take the credit for someone else's idea.
40. (c) "going to bring you up to speed" means to give the latest information.
41. (b) The use of despite suggests that there will be a contrast so the professor will not agree with the first statement. Therefore option b is the most appropriate choice.
42. (a) Throw light on means to explain something by providing further information about it. Option b and d are grammatically wrong. Turn light on means to actually switch on the light.
43. (b) Option a is grammatically wrong as the effects lower salaries would have isn't right as per the rule of parallelism. Option d is a distortion therefore it is wrong. Again option c is grammatically incorrect.
44. (d) Besides means in addition to, example; besides food she gave him money. So, we need a subject to make the sentence grammatically correct. Bearing this in mind, option a, b and c can be eliminated.
45. (b) Not only ..but also, will take noun in both the clauses. So if the animal activists are raising awareness not only of the **plight** of something...it should be followed by," but also on the **plight/that of** bulls and temple elephants." Therefore, option b is the most appropriate answer choice.
46. (c) Option c very comfortably talks about germs in the first clause which matches with the preceding information and people in the second clause which goes well with the succeeding sentence.
47. (d) The passage essentially talks about Samar being creative and popular. Option a,b and c can be easily eliminated as the passage makes no reference to television or making money on the internet. Therefore, option d is a clear cut choice.
48. (b) Option d can be eliminated as wealthy won't fit in the last blank. The productive communities in the water can't be wealthy and since fruitful and productive mean the same option a can also be eliminated. Now if we choose option c, deep won't fit in the first blank as we can't say one of the most deep. Therefore, option b is the most suitable answer.
- Fragile – can be broken easily
Fascinating – extremely interesting
Prolific - plentiful
- Exuberant – full of energy
Frail – weak and delicate
49. (b) Option a can be eliminated as adventures doesn't go well contextually in the last blank. Similarly, option c and can also be eliminated as punishment, hate and lovely, pride won't fit contextually in the first two blanks.
- Privilege – advantage
Bigotry - the fact of having and expressing strong, unreasonable beliefs.
Terror – extreme fear
50. (b) Option c and d will be eliminated as tectonic and green won't fit in the last blank as these refer to literal landscape.
- Option a can be deleted as sustainable won't fit contextually in the last blank, reason being, a sustainable landscape won't shift dramatically. Option b is the correct answer.
- Shape – form
Guide – advise
Competitive - characterized by competition.
sustainable - able to be maintained at a certain rate or level
51. (b) Option a can be eliminated as 'happening' won't fit grammatically in the first blank. Similarly, the middle word, give up in option d won't be an appropriate fit if luck is to be filled in the last blank, therefore option d can also be eliminated. Out of b and c, former is a better choice as chances fit more appropriately than certainly in the last blank.
52. (d) Option b and c can be eliminated as the middle words collected and covered are in past tense therefore these won't go with the flow of the whole paragraph which is in present tense. Option a should be eliminated as middle option discount doesn't fit contextually in the given scenario. Option d is the answer.
- Pooled – accumulated (used as an adjective here)
Group - category
Develop – expand, grow
53. (d) The word urbane is an adjective which means of a person) courteous and refined in manner., therefore it's used appropriately in option a, b and c. The word urban which means characteristic of a town and city should have been used here.
54. (c) Ingenious means clever, original, and inventive where as ingenuous means innocent and unsuspecting

- 55. (c) Ordinance means an authoritative order or a rule to be followed ordinance means artillery, guns etc.
- 56. (b) All together means everyone or everything together; altogether means all in all, completely
- 57. (c) Affect is a verb which means impact or change therefore has been aptly used in sentence a, b and d. However, effect is a noun. After effect would have been appropriate in option c.
- 58. (BADC) Option b introduces the premise and option a takes the thought further. Option d and c are compulsory pairs as they take about low budget films. Therefore, the correct sequence is BADC
- 59. (CDAB)
- 60. (CEBDA)

toprankers
SUPERGRADS

IPM Astra Test Series



Practice with:

- 10 IPMAT Mock Tests
- Exhaustive IPMAT Level-up Mock Tests for IPMAT + new practice
- SOL of the most important questions for 2024 IPM exams

- Get detailed Graphical Analysis for every single test.
- Access post-test solutions' explanation on video.
- Take multiple Topic Tests to hone your section-wise preparation.




PREPARE @ JUST ₹ 999

toprankers
SUPERGRADS

JOSH-1 Year long Batch for 2025

IPMAT Indore | IPMAT Rohtak | JIPMAT | Christ University Entrance Test | NPAT | Symbiosis Entrance Test | St. Xavier's Mumbai Entrance Test

- **600+** Live Lectures & their Recordings
- **23+** hard copy Rankers' Study Materials
- **100+** Full-length Mocks, 120+ Topic tests
- **Interview Preparation** for IIM Indore from Day 1
- **1-1** Personalized Mentorship & Performance Support



CLICK TO ENROLL NOW

SuperGrads Study Material


GRAND MASTER'S BOX



SURESHOT PRACBOOK



RANKERS' STUDY MATERIAL



MOCK ANALYSIS COPY



SCAN TO BUY NOW



SuperGrads IPM Social Media



INSTAGRAM

★ SuperGrads IPM by Toprankers Instagram channel is making waves with its captivating reels, memes, and informative posts tailored for IPM & Top BBA entrance preparation.



super.grads



TELEGRAM

✈ SuperGrads IPM Telegram channel leads as the most subscribed channel in India for IPM & BBA entrances. With over 8k subscribers it's become a hub for students seeking IPM-specific academic content.



SuperGrads
IPM | BBAEntrances by Toprankers



YOUTUBE

🏆 The SuperGrads IPMAT YouTube channel holds the top spot in India's IPM category on YouTube. With over 50k subscribers, the channel's videos regularly garner 30k+ views, showcasing its broad appeal.



SuperGrads
IPMAT Coaching by Toprankers



LEARNTOGETHER

💬 Ask, Answer and Discuss: Students can actively participate by asking questions, providing answers, and engaging in discussions to enhance their learning experience on Learn TR community. Students also join Learn Together for expert advice, premium sessions, and free resources tailored for IPM & BBA entrance prep.



IPM
LearnTogetherR



510+



Final Selections in IPM &
Other BBA Entrances in 2023

CONSISTENTLY DELIVERING TRUST & AUTHENTIC RESULTS IN
QUANTITY & QUALITY

IPM INDORE (20+ Final Selections)



Hirday



Seerat



Sambhav



Tanish



Harshvardhan



Bhavinee



Aryan



Jishnu



shreyash



Sreehari



Eklavya



Raj



Jeyanth



G Rajlakshmi



Ajeet



Pradhuman



Harshdeo



Yash

& MANY MORE

IPM ROHTAK (30+ Final Selections)



Aaditya



Aaradhya



Aastha



Abhyudaya



Alok



Ambica



Amlan



Ansh



Arjun



Arsh



Aryan



Bhaavya



Bhaavya



Chhavi



Divya



Hardik



Harshvardhan



Karthik



Jayaditya



Karthik



Kartikay



Kashvi



Kshitij



Lavisha



Mahika



Kavya



Mahima



Meghanshu



Mukul



Ojas

& MANY MORE